

## 6th Class Work June 22nd- 26th

Dear Parents & Pupils,

Please find the work below for the week of the 22nd June. This document will cover next week and the Monday and Tuesday of the following week. We realise that it is extremely difficult to find the motivation to continue with the work but please make every effort. Every bit will help you when you start in St Aidans CS. As ever the teachers are available to help you with any aspect of the work and we encourage work to be emailed in.

All pupils are to do the English work that is set in the document. This work is suitable for all pupils.

Our Virtual Sports Week starts on Monday and will run until June 30th. Please keep a close eye on the school app for challenges that all members of the family can do.

As you will be aware by now parents are allowed to come to the school on Thursday 25th to return books that the pupils borrowed between 11.00AM and 1.00PM. It is imperative that everyone adheres to the HSE guidelines outlined in Mr Hayes message. Parents will also get a chance to pick up some special mementos for the kids.

If you have any questions don't hesitate to contact the teachers through their email addresses below.

Keep safe

### **Email addresses:**

1. Mr Rennick- [jrennick@staidanssns.ie](mailto:jrennick@staidanssns.ie)
2. Ms O`Reilly- [moreilly@staidanssns.ie](mailto:moreilly@staidanssns.ie)
3. Ms Somerville- [jsomerville@staidanssns.ie](mailto:jsomerville@staidanssns.ie)
4. Ms Riordan- [friordan@staidanssns.ie](mailto:friordan@staidanssns.ie)
5. Ms Daly- [kdaly@staidanssns.ie](mailto:kdaly@staidanssns.ie)
6. Ms [Hamilton-ghamilton@staidanssns.ie](mailto:Hamilton-ghamilton@staidanssns.ie)
7. Ms Hodson [chodson@staidanssns.ie](mailto:chodson@staidanssns.ie)

[Click here to return to the timetable](#)

**[Click on the work in the timetable to take you directly to the correct page.](#)**  
**[You may then need to click on the word \[Bookmark\]\(#\).](#)**

### **Timetable**

	<b>Monday</b>	<b>Tuesday</b>	<b>Wednesday</b>	<b>Thursday</b>	<b>Friday</b>
<b>P.E</b> (Weekdays 9am)	<a href="#">Virtual Sports Week</a>	<a href="#">Virtual Sports Week</a>	<a href="#">Virtual Sports Week</a>	<a href="#">Virtual Sports Week</a>	<a href="#">Virtual Sports Week</a>
<b>Maths</b>	<a href="#">Revision</a>  <a href="#">Look Back</a> <a href="#">Ms O Reilly/</a> <a href="#">Ms Hodson/</a> <a href="#">Mr Rennick</a>	<a href="#">Revision</a>  <a href="#">Look Back</a> <a href="#">Ms O Reilly/</a> <a href="#">Ms Hodson/</a> <a href="#">Mr Rennick</a>	<a href="#">Revision</a>  <a href="#">Look Back</a> <a href="#">Ms O Reilly/</a> <a href="#">Ms Hodson/</a> <a href="#">Mr Rennick</a>	<a href="#">Revision</a>  <a href="#">Look Back</a> <a href="#">Ms O Reilly/</a> <a href="#">Ms Hodson/</a> <a href="#">Mr Rennick</a>	<a href="#">Revision</a>  <a href="#">Look Back</a> <a href="#">Ms O Reilly/</a> <a href="#">Ms Hodson/</a> <a href="#">Mr Rennick</a>
	B	R	E	A	K
<b>English</b> ( for all groups and classes)	<a href="#">Reflection- Nearing the end of 6th class</a>	<a href="#">The Impact of Covid-19.</a>	<a href="#">Graduation</a>	<a href="#">Looking forward</a>	<a href="#">School Rules</a>
	L	U	N	C	H
<b>SESE/Arts</b>	<a href="#">Science: Environmental Care</a>			<a href="#">Science: Environmental Care</a>	

[Click here to return to the timetable](#)

	Monday 29th	Tuesday 30th
Tour	<a href="#">Áras Tour</a>	<a href="#">Dublin City Tour</a>

## Virtual Sports Week



2020 Sports Day will be one week long!

- A challenge will be posted on the school app each morning during Virtual Sports Week.
- Every child who completes the daily challenge and returns a photo or a short video will earn points for their class.
- The class with the largest number of points at the end of the week will win a prize when we return to school.
- All entries are to be sent to [uclingan@staidanssns.ie](mailto:uclingan@staidanssns.ie). I will keep a daily tally and will keep teachers informed throughout the week.
- **Schoolwork for the week will be reduced and may link in with the theme of Virtual Sports Week.**

The daily challenges will be accompanied by a short video starring teachers from our school!

<b>Monday</b>	Egg and Spoon with Ms Hartland
---------------	--------------------------------

[Click here to return to the timetable](#)

<b>Tuesday</b>	Keepy-uppies with Mr Rennick
<b>Wednesday</b>	Sprint challenge with Ms Walsh
<b>Thursday</b>	GAA Challenge with Mr Kelly
<b>Friday</b>	Three legged Challenge with Ms Riordan
<b>Monday</b>	Meditation
<b>Tuesday</b>	Yoga

The chosen challenges require little or no equipment and are designed to be quick and approachable. At the end of the week I will make a video montage with some of the entries.

Just like a normal Sports Day, it is hoped that Virtual Sports Week will give both teachers and students an opportunity to relax and enjoy the outdoors as we approach the end of another school year.

[Click here to return to the timetable](#)

# Monday 22nd June - Maths

**Write in numerals:**

1. three hundred and twenty-five thousand, five hundred and fifty-four

\_\_\_\_\_

2. six million, seven hundred and twenty thousand, two hundred and one

\_\_\_\_\_

**Write in words:**

3. 726 311

\_\_\_\_\_

4. 8 257 949

Rough Work

**Complete:**

5. 
$$\begin{array}{r} 34\ 592 \\ + 98\ 354 \\ \hline \end{array}$$

6. 
$$\begin{array}{r} 685\ 941 \\ + 328\ 937 \\ \hline \end{array}$$

7. 
$$\begin{array}{r} 54\ 832 \\ - 28\ 571 \\ \hline \end{array}$$

8. 
$$\begin{array}{r} 9\ 368\ 421 \\ - 918\ 813 \\ \hline \end{array}$$

9. Calculate the number which is 2584 less than 20 590.

Answer: \_\_\_\_\_

- 10.** A jeweller sold three expensive pieces of jewellery to one customer in one day. They cost €10 450, €8995 and €15 550. What was the total cost of the 3 pieces of jewellery?

Answer: \_\_\_\_\_

- 11.** The jeweller decided to offer the customer 10% off the total cost of the sale. How much did the customer have to pay?

Answer: \_\_\_\_\_

- 12.** A jeweller sold 5 watches. The watches cost €250, €60, €145, €85 and €110. What was the average cost of the watches sold?



## Monday 22nd June - English

### A. Nearing the end of 6<sup>th</sup> class

i) Moving on...Moving up! (*Think about moving on to post-primary school. What are you thinking/planning/feeling? Write some thoughts, goals or plans you have at each step of the stairs of the stairs below.*)

***Here are some examples: I can't wait to try new subjects, I look forward to joining the La Cheile, I wonder if it will be scary, I plan to make new friends, It's exciting!. It might be strange, I hope the principal is kind, Having lots of teachers will be odd. The difference between Primary school and Secondary school.***



### B. Gratitude Journal

Keep a "Gratitude Journal" for the week. Try and focus on the following:

1. Five people you are thankful for.
2. Five things you are grateful for.
3. Five things you have learnt or are working on during these times.
4. Choose one happy moment from your day and focus on it for five minutes.  
Write down the different feelings you had.

## **Monday 22nd June - Science**

**Please look at the PowerPoint below and answer the questions**

[https://doc-04-4s-apps-viewer.googleusercontent.com/viewer/secure/pdf/4t7p546jf5crml3dihj12ald1k7a55m3/fnr2ot8qo205r833d4iivuvv2kp68cp6/1592395050000/drive/14803521606351748628/ACFrOgAjObQtpZUdYjn7ll2cjoWpXNpvnApWQl7Af54\\_M95ltRd7f4QeC3LAql67ak26Ji4CpvGqQlnlEkN5MR\\_uaG26jN-ufyAytumSc1isEPulxcCK\\_YURcsp2Bp9s7gKtVUGN0OJo7OBkbBUg?print=true&nonce=ismh2t2r9vqre&user=14803521606351748628&hash=5ea8sv5q1qa2h70usq06c8p6g1u4dd6q](https://doc-04-4s-apps-viewer.googleusercontent.com/viewer/secure/pdf/4t7p546jf5crml3dihj12ald1k7a55m3/fnr2ot8qo205r833d4iivuvv2kp68cp6/1592395050000/drive/14803521606351748628/ACFrOgAjObQtpZUdYjn7ll2cjoWpXNpvnApWQl7Af54_M95ltRd7f4QeC3LAql67ak26Ji4CpvGqQlnlEkN5MR_uaG26jN-ufyAytumSc1isEPulxcCK_YURcsp2Bp9s7gKtVUGN0OJo7OBkbBUg?print=true&nonce=ismh2t2r9vqre&user=14803521606351748628&hash=5ea8sv5q1qa2h70usq06c8p6g1u4dd6q)

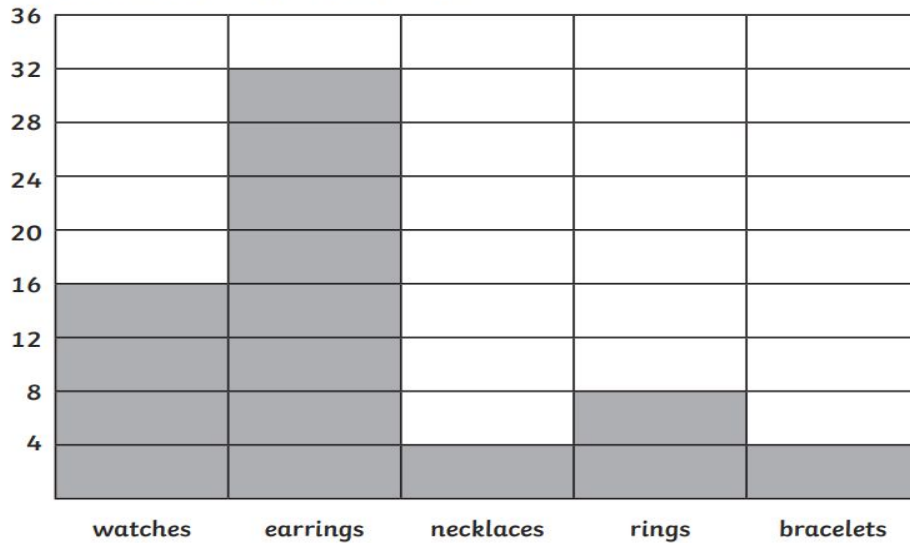
### **Questions**

1. What is the environment?
2. Why should we take care of the environment?
3. Can you name some of the human impacts on the environment?
4. What causes air pollution?
5. How does acid rain occur?
6. What is global warming and how can we stop it?



# Tuesday 23rd June - Maths

The bar chart below shows the sales in a jewellers in one day. Study the chart and then answer the questions below.



14. Which item was the most popular? \_\_\_\_\_
15. What fraction of the items sold were rings? \_\_\_\_\_
16. What fraction of the items sold were watches? \_\_\_\_\_

**Calculate:**

17. 
$$\begin{array}{r} 25\ 621 \\ \times 37 \\ \hline \end{array}$$

18. 
$$\begin{array}{r} 351\ 225 \\ \times 53 \\ \hline \end{array}$$

19. 
$$\begin{array}{r} 584.5 \\ \times 7.7 \\ \hline \end{array}$$

20. 
$$\begin{array}{r} 362.21 \\ \times 5 \\ \hline \end{array}$$

Label the circle.

21. \_\_\_\_\_

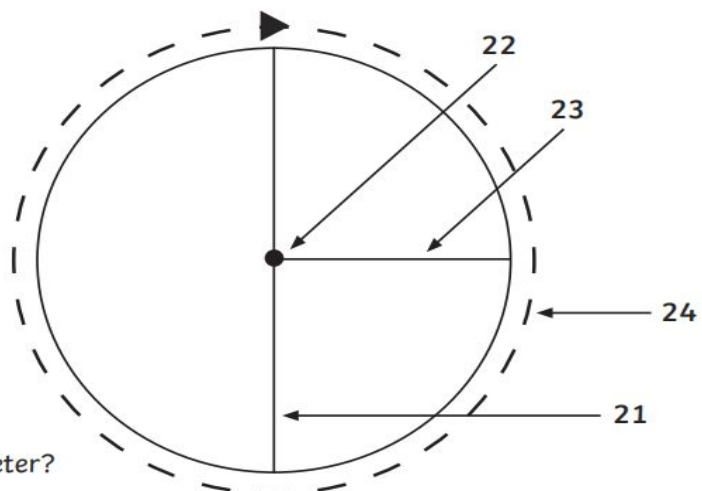
22. \_\_\_\_\_

23. \_\_\_\_\_

24. \_\_\_\_\_

25. If the radius of a circle is 4cm, what is the diameter?

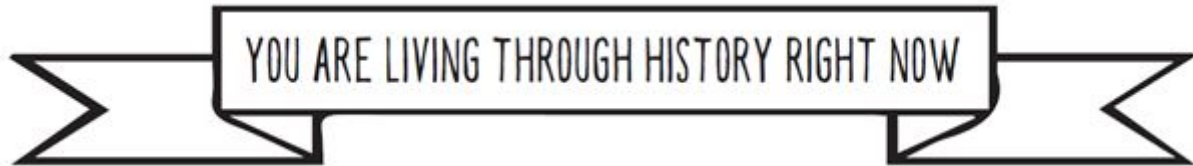
\_\_\_\_\_



## Tuesday 23rd June - English

### A.The Impact of COVID-19

i) My school experience since COVID-19 School closures.



COVID-19 has caused the world to stop. Think about the time you have spent at home since school closed. Complete the tasks below:



Tick off and write out some of the things you have done since March 12<sup>th</sup> 2020. Take some pictures and send them into your teacher!!

- |  |   |
|--|---|
| <input type="checkbox"/> SOME PHOTOS FROM THIS TIME        | <input type="checkbox"/> ANY ART WORK YOU CREATED |
| <input type="checkbox"/> A JOURNAL OF YOUR DAYS            | <input type="checkbox"/> FAMILY / PET PICTURES    |
| <input type="checkbox"/> LOCAL NEWSPAPER PAGES OR CLIPPING | <input type="checkbox"/> SPECIAL MEMORIES         |

- Add some of your own and draw a picture of the people you are social distancing with at home.
- Describe how Covid-19 has impacted on your life since March 12th.
- Words to describe how you feel.
- What have you learnt from this life changing experience?
- What are the three things you are most excited about doing when we get back to normal?
- People or places you are most excited to visit when this is over

[Click here to return to the timetable](#)

## Wednesday 24th June - Maths

29.  $216 \div 9 =$

\_\_\_\_\_

30.  $28 \overline{)924}$     31.  $52 \overline{)811.2}$     32.  $2.2 \overline{)68.2}$

Simplify.

33.  $\frac{36}{40} =$     34.  $\frac{75}{50} =$     35.  $\frac{400}{1000} =$     36.  $\frac{150}{1000} =$





37. Charlie spent  $\frac{1}{3}$  of his money on a fidget spinner and  $\frac{3}{8}$  of his money on a football. What fraction of his money did he spend?

\_\_\_\_\_

38. Brian spent  $\frac{4}{9}$  of his money on a fidget spinner. That cost him €8. How much money had he at first?

\_\_\_\_\_

39. Lucy had 5 cakes at her birthday party. Each child got  $\frac{1}{5}$  of a cake. How many children were at her party?

\_\_\_\_\_

# Wednesday 24th June - English

Use the headlines below to describe how you will feel about Graduation.

## GRADUATING IN THE MIDDLE OF A PANDEMIC

.....  
HOW I PLANNED TO SPEND GRAD:

HOW I ACTUALLY SPENT GRAD:

.....  
MY CLOSEST FRIEND(S):



My favourite saying or quotes from 6th class \_\_\_\_\_

My funniest memory from 6th class \_\_\_\_\_

My favourite moment with my teacher was when \_\_\_\_\_

Something special that represents your Class of 2020 \_\_\_\_\_

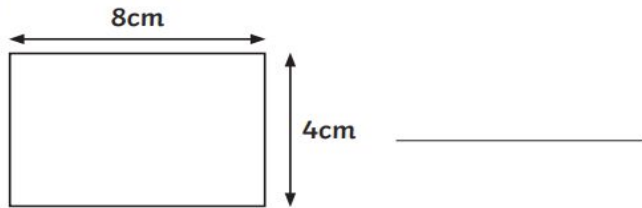
My biggest accomplishment \_\_\_\_\_

What St Aidans SNS means to you \_\_\_\_\_

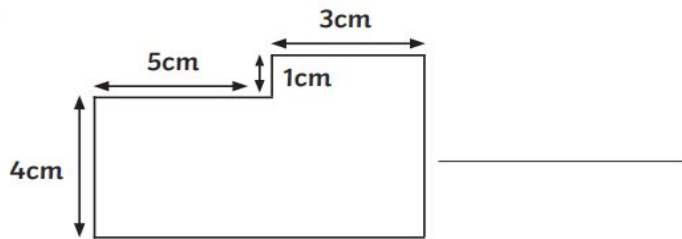
## Thursday 25th June - Maths

Calculate the area of the shapes below:

45.



46.



47. If the area of a garden is  $354\,000\text{cm}^2$ , what is the measurement in  $\text{m}^2$ ?

\_\_\_\_\_

48. Find the perimeter of a room with two sides which are 6.8m and two sides which are 5.5m.

\_\_\_\_\_

49. Calculate the perimeter of a hexagonal conservatory whose sides are 5m long.

\_\_\_\_\_

50. 6<sup>th</sup> class went on a school trip. They left the school at 8:50 a.m. They returned at 3:40 p.m. How long were they away from the school for?

\_\_\_\_\_

# Thursday 25th June - English

Write out this information into your copy and discuss with family and friends.

## **a. My Chosen Post-Primary School**

### **School Details ( Look up the school website)**

School Name: \_\_\_\_\_

School Address: \_\_\_\_\_  
\_\_\_\_\_  
\_\_\_\_\_  
\_\_\_\_\_

How many pupils in the school? \_\_\_\_\_

How many pupils will be in first year? \_\_\_\_\_

Uniform or Non-Uniform

### **Do you like the new uniform?**

- Yes
- No
- Don't know yet

**Is there anything the same or different to your previous uniform in 6<sup>th</sup> class?**

\_\_\_\_\_

### **Do you know anybody who goes to this school?**

- Yes....who are they and what year are they in

\_\_\_\_\_  
\_\_\_\_\_

- No

**What do you think post-primary school will be like?** \_\_\_\_\_

\_\_\_\_\_

Have you heard anything about this new school? \_\_\_\_\_

\_\_\_\_\_

Name 1 thing you're looking forward to about your new school. \_\_\_\_\_

\_\_\_\_\_

### The School Website

Does your school have a website?

Yes

No

Don't know

If yes, what is the web address?

[www.](#)\_\_\_\_\_.

Browse your new school's website and see what you can find out. Make note of some of the weird, wonderful or interesting things you find in your copy.

## **Thursday 25th June - Science**

Please look at the youtube clip based on the continent 'Antarctica' and answer the questions below.

<https://www.youtube.com/watch?v=t3StWheKtq8>

### **Questions**

1. What type of continent is Antarctica?
2. Where is it located?
3. How large is Antarctica compared to the other continents?
4. How much of Antarctica is covered in ice?
5. When was Antarctica first sighted?
6. What happens when snow accumulates?
7. What are the 2 seasons in Antarctica?
8. What animals can you find in Antarctica?
9. What is the population of Antarctica?



## Friday 26th June - Maths

59. An unexpected snowstorm caused temperatures to drop by 5 degrees. The temperature before the drop was 2 degrees. What was the temperature during the snowstorm?

\_\_\_\_\_

60. Simon jumped into a pool from a diving board. The height of the diving board was 6 metres. He jumped to a depth of 3 metres below the water. What distance did Simon drop?

\_\_\_\_\_

**Find the value of x.**

61.  $2 \times 10 = x \times 4$

62.  $\frac{75}{50} = 12$

63.  $x \div 4 = 20$

x = \_\_\_\_\_

x = \_\_\_\_\_

x = \_\_\_\_\_

**Using the facts  $x = 5$   $y = 12$ , calculate:**

64.  $x + y =$  \_\_\_\_\_ 65.  $3x - y =$  \_\_\_\_\_

66.  $\frac{75}{50} + 5x =$  \_\_\_\_\_ 67.  $8 + 13 + 17 \times 5 =$  \_\_\_\_\_

68.  $8 + 12 \div 2 \times 2 =$  \_\_\_\_\_

# Friday 26th June - English

School rules: Fill out in your copy and send on your thoughts to your teacher.

Why do you think a school has rules?

Talk to somebody who goes to your new school about the new rules, or browse the website and you might find some of the main rules there. Write them as below in your copy. Think about why these rules are important and discuss with your parents.

1. \_\_\_\_\_
2. \_\_\_\_\_
3. \_\_\_\_\_
4. \_\_\_\_\_
5. \_\_\_\_\_

Have you heard about a **Code of Discipline**? You might find one on the school website. This is the plan for what happens when somebody breaks the school rules. What do you think might happen if you break some of the rules above? Talk to somebody about your ideas.

---

---

---

---

# Monday Maths- Ms O Reilly, Ms Hodson, Mr Rennick

Try these 20 sums. Write the answers in your copy.

**WEEK 7 - MONDAY**


**T  
A  
B  
L  
E  
S**

- $8 + 8 = \square$
- $8 + 7 = \square$
- $8 + 5 = \square$
- $8 + 6 = \square$
- $3 + 8 = \square$


6. Divide €2.00 equally among 5.

7. Two bars cost 36c. How much for one?

8.  is halfway between 20 and 30.

9.  The difference between two numbers is nine. The smaller number is 15. What is the larger number?

10.  $9 + \square + 6 = 21$

11.  Sue cycled 400 m and ran 300 m. How many metres did she travel?

12. Jim is 1 m 19 cm tall. Fred is 26 cm taller. How tall is Fred?

13. Take 4 from 400.

14.  $38 + \square = 50$

15. Dad uses 400 g of a 1 kg bag of flour. How many grammes of flour are left?

16.  $€2.00 - €0.46 = \square$   
 a €1.44  b €1.56  c €1.54

17.  $€4.00 - €2.13 = \square$   
 a €2.14  b €2.26  c €1.87


18.  $€6.00 - €2.96 = \square$   
 a €4.12  b €3.04  c €4.14

19.  $€10.00 - €1.99 = \square$   
 a €8.81  b €8.01  c €9.31

20.  $€20.00 - €12.75 = \square$   
 a €7.25  b €8.25  c €7.50

**Score**

**20**

**ork it out** 

## Tuesday Maths- Ms O Reilly, Ms Hodson, Mr Rennick

Try these 20 sums. Write the answers in your copy.

**T  
A  
B  
L  
E  
S**

1.  $8 + \square = 13$


2.  $8 + \square = 15$

3.  $8 + \square = 14$

4.  $\square + 8 = 10$


5.  $\square + 8 = 14$

6. What must be added to a quarter of 36 to make 24?

7.  How many centimetres are there in  $\frac{1}{2}$  a metre?


8.  $7c + 6c + 9c + 9c = \square$

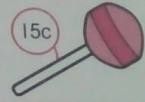
9.  $1\text{ m } 20\text{ cm} + 3\text{ m } 35\text{ cm} = \square$

10.  The difference between two numbers is 13. If the larger number is 21, what is the smaller number?

11.  $9 + 8 + 7 = \square$

12.  $\text{€}10.00 - \text{€}3.65 = \square$

13.  How many minutes are there from half past four until half past five?

14.  What change will I get if I buy three lollipops for 15c each?

15. Subtract 47 from 200.

16.  $31 - \square = 17$  a 15 b 16 c 14

17.  $42 - \square = 33$  a 11 b 9 c 12

18.  $44 - \square = 27$  a 27 b 19 c 17

19.  $60 - \square = 31$  a 27 b 29 c 28

20.  $74 - \square = 36$  a 38 b 28 c 18

Score

## Wednesday Maths- Ms O Reilly, Ms Hodson, Mr Rennick

Try these 20 sums. Write the answers in your copy.

**T  
A  
B  
L  
E  
S**

1.  $12 - 8 = \square$

2.  $14 - 8 = \square$

3.  $17 - 8 = \square$

4.  $\square - 8 = 0$


5.  $\square - 8 = 6$

6.  $\frac{1}{4}$  of a number is 6. What is  $\frac{1}{2}$  of the number?  $\square$

7. What number is 4 greater than 798?  $\square$

8.  $400 - 179 = \square$

9.  $50 - 24 = \square$

10.  Dad had €64. He spent  $\frac{1}{2}$  of his money on a book. How much was the book?  $\square$


11. Ciara has four 20c coins and two 10c coins. How much has she altogether?  $\square$

12. Write the missing number. 3, 8, 13, 18,  $\square$

**WEDNESDAY**

13. Write the missing number. 1, 4, 8, 13,  $\square$

14.  $\square - 12 = 18$

15.  What fraction of the circle is shaded?  $\square$




16. What number is 12 less than 103?  
a 81 b 71 c 91

17. What is double 35?  
a 60 b 70 c 50

18. How many faces does a cube have?  
a 6 b 5 c 4

19. Four children share 80c equally. How much does each one get? a 15c b 25c c 20c

20. What is half of 84?  
a 41 b 42 c 43

   **Score** 20



## Thursday Maths- Ms O Reilly, Ms Hodson, Mr Rennick

Try these 20 sums. Write the answers in your copy.

**WEEK 7 - THURSDAY**

**T  
A  
B  
L  
E  
S**

1.  $8 + 3 = \square$

2.  $8 + 9 = \square$

3.  $8 + 5 = \square$

4.  $\square + 8 = 14$

5.  $\square + 8 = 12$


6. What fraction of 1 hour is 15 minutes?

7. Take 30 from 334.

8. Add 40 to 290.


9. How many centimetres less than 3 metres is 2 m 79 cm?

10.  $564 = 500 + \square + 4$

11.  During a sale a hoodie is €27 less than the normal price of €85. How much is the hoodie in the sale?

12.  $25 + 60 + 20 = \square$

13.  $€4.00 - €2.34 = \square$

14.  What fraction is shaded?

15. The sum of two numbers is 43. One number is 27. What is the other number?




16. What number is halfway between 6 and 18?  
 a 10  b 12  c 14

17. What must be added to 38 to make 45?  
 a 7  b 8  c 9

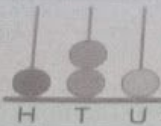
18. In a class of 46, 27 are boys. How many are girls?  a 19  b 29  c 9

19. Take half of 24 from 21.  
 a 7  b 8  c 9

20. How many halves in 5 units?  
 a 8  b 10  c 12

     **Score**  **20**

1. What number is missing?  
3, 5, 7, , 11, 13  a 8  b 9  c 10

2.  What number is shown on the abacus?  
 a 212  b 121  c 122

3.  $9 + 9 + 6 = \square$   
 a 34  b 24  c 27

4.  $9 + 9 + 8 = \square$   
 a 26  b 24  c 22

5.  $10 + 8 - 7 = \square$   
 a 10  b 11  c 22

6. What number is 5 more than 69?  
 a 71  b 73  c 74

7. What number is 3 less than 81?  
 a 68  b 78  c 79

8. What number is missing?  
8, 12, 16, 20, , 28  
 a 21  b 23  c 24

9. Which is the greatest number?  
 a 123  b 321  c 231

10. What number is 5 less than 101?  
 a 96  b 94  c 98

11. What is four hundreds + three tens + four units in figures?  
 a 344  b 434  c 343

12. What is the sum of 9, 7 and 8?  
 a 21  b 24  c 27

13. What number is 10 smaller than 234?  
 a 231  b 222  c 224



## Monday 29th June - History

Read the information below:

### Áras an Uachtaráin

Áras an Uachtaráin is the official residence of the President of Ireland. It was built in 1751 and is situated on 1,752 acres (709 hectares) in the Phoenix Park. It became the residence for the president in 1938 when Douglas Hyde, the first president of Ireland, lived there.

There have been many improvements and additions to the house over the years, including the creation of formal garden, the addition of the East Wing and the extension of the West Wing. The house currently has 95 rooms. The house is open to the public each Saturday and 5,200 people visit the formal rooms and view the grounds each year.



### Michael D. Higgins

Michael Daniel Higgins is the current president of Ireland. He is the 9<sup>th</sup> president of Ireland. He was elected as the president of Ireland in November 2011. He has served one term as president. Before entering the world of politics, he was a lecturer in sociology and political science in NUI Galway. In 1993, he became the Minister for Arts, Culture and the Gaeltacht. He is a published writer and poet. He is also a fluent speaker of the Irish language.





Have you ever wondered what Áras an Uachtarain looked like on the inside?

Click on the link below, follow the green arrows, and enjoy a virtual tour of the home and workplace of our president, Michael D. Higgins!

<https://president.ie/en/explore-visit/interactive-tour>

## **Tuesday 30th June - History**

Before the schools closed, we were learning all about the 1916 Easter Rising. Enjoy a virtual tour of the locations around Dublin city that were the focus of action during the Easter Rising by clicking the link below:

<https://dublinrising.withgoogle.com/welcome/>