

5th Class

Hello 5th class parents and students,

This is the final Home Learning plan for the year. There is 7 days of work in this plan, Monday 22nd to Friday 26th and then Monday 29th and Tuesday 30th. Each day you will just have a fun maths and literacy activity since it is the last week of the school year. We are all missing out on some of the more fun things about school, like tours, class parties and sports day. However, you can still have fun at home because this week is **Virtual Sports Week**.



There will be a sporting activity or challenge posted on the app each day. We would like everyone to try as many challenges as they can! Encourage your family to take part too!!

Don't forget the final zoom call with all 5th classes this Thursday 1:30pm! Your teacher will have emailed you the details....email if you can't find the invite! If you haven't already joined a class zoom, this would be a really nice opportunity to chat to your teacher and friends before the

summer holidays!

We hope all of you have a lovely break for the summer and your teachers are so looking forward to when we are all back together at the end of August!!

Ms. Murphy.

Ms. Murphy pmurphy@staidanssns.ie

Mr. Moloney mmoloney@staidanssns.ie

Mr. Finn cfinn@staidanssns.ie

Ms. Dolan ldolan@staidanssns.ie

Ms. Bergin sbergin@staidanssns.ie

Ms. Hodson chodson@staidanssns.ie

Ms. McCormick jmccormick@staidanssns.ie

Mr. Mac Suibhne fmacsuibhne@staidanssns.ie

Ms. Ni Tharpaigh atarpey@staidanssns.ie

Suggested Home Learning Timetable 5th Class

	Mon	Tues	Wed 24th	Thurs 25th	Friday 26th	Mon 29th	Tues 30th
9:00	Maths	Maths	Maths	Maths	Maths	Maths	English
10:00	English	English	English	English	English	English	English
10:30	Break	Break	Break	Break	Break	Break	Break
11:00	Egg and Spoon Challenge with Ms. Hartland	Keepie uppies with Mr. Rennick	Sprint Challenge with Ms. Walsh	GAA challenge with Mr. Kelly	3 legged Challenge with Ms. Riordan	Meditation	Yoga

Here are some more useful websites:

Maths

https://www.mathsonline.com.au/games/times_table

<https://mathsframe.co.uk/>

<https://www.khanacademy.org/math>

<https://nrich.maths.org/1458>

English

<https://spellingframe.co.uk/>

<https://www.worldofdavidwalliams.com/elevenses/>

<https://www.oliverjeffers.com/abookaday/>

SESE

<https://www.ducksters.com/>

<https://www.sciencekids.co.nz/videos/biology/bacteria.html>

<https://www.google.com/earth/>

<https://artsandculture.google.com/project/streetviews>

Monday 22nd June

Maths

Try these 4x4 sudoku puzzles below.

Go to <https://sudoku.cool/4x4-sudoku-download.php> for an extra challenge.

	1		
2			1
			4

©Sudoku.cool

	1		2
		1	
4	2		

©Sudoku.cool

	2	1	
3			
			4


©Sudoku.cool

2		1	
4			3

©Sudoku.cool

English

St. Aidan's Crossword



Down:

1. The school colours
3. The secretary's first name
7. This 5th class teacher is from Offaly

Across:

2. This man looks after the school
3. This 5th class teacher is a male
4. This teacher likes hurling!
5. The principal's surname
6. This 5th class teacher is from Monaghan
8. The school football team played a final here
9. The deputy principal's surname

Activity Two: Write one page in your copy about all of the wonderful things you would like to do over the summer holidays. Draw a picture and colour in.

Tuesday 23rd June

Maths

Favourite Sport Survey

Here are the results of a survey conducted to see what the favourite sports of pupils in a class were:

Football	Netball	Hockey	Football	Football
Hockey	Other	Running	Football	Hockey
Other	Other	Karate	Running	Netball
Running	Karate	Netball	Karate	Football
Karate	Other	Other	Other	Football
Netball	Football	Netball	Running	Netball
Other	Running	Football	Running	Other

1. Complete the tally chart below with the results:

Sport	Tally	Total
Football		
Hockey		
Running		
Karate		
Netball		
Other		

2. Now draw a bar line chart using the data from your tally chart.

Remember: a title, to use an appropriate scale, draw dots at the correct point and then use a ruler to draw the line!

3. Now conduct your own survey for everyone's favourite sport, fruit or colour!



visit [twinkl.com](https://www.twinkl.com)



English

The Wimbledon Championships

Wimbledon is the world's oldest tennis tournament. Since 1877 it has been held at the All England Club in Wimbledon, London. It is one of the four Grand Slam tennis tournaments (majors), the others being the French Open, the Australian Open and the US Open.



Events

Wimbledon is made up of five main events, four junior events and invitation events, where some former professionals return to compete. The five main events are the gentlemen's singles, ladies' singles, gentlemen's doubles, ladies' doubles and mixed doubles.

Schedule

Wimbledon takes place for two weeks in July. Usually, there is no play on the 'Middle Sunday', however bad weather has sometimes meant that matches are played on this day.

The Courts

In 2009, a moving roof was added to Wimbledon's Centre Court. It can be automatically closed over the court.

The main courts, Centre Court and No. 1 Court, are normally only used for two weeks every year during the championships. The other 17 courts are used for other events hosted by the club. All of the courts are grass courts.

Trophies and Prize Money

The gentlemen's singles champion receives a silver gilt cup. The women's singles champion wins a sterling silver salver.

A Few Famous Champions

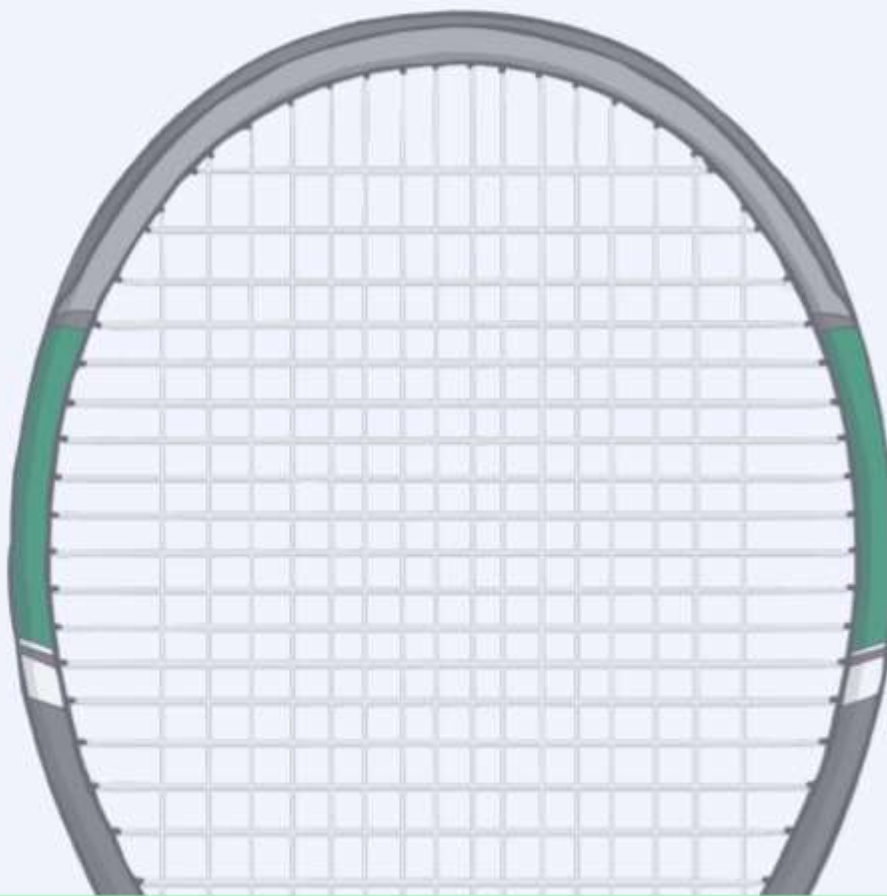
Serena Williams, and her sister Venus, have each won the singles title at Wimbledon several times. They have played against each other in the final.

Roger Federer won the men's singles title five times in a row between 2003 and 2007.

In 2013, Sir Andy Murray won the men's singles title. He was the first British singles winner since 1977 and the first male winner since 1936.

Did You Know....?

- Tennis players' clothing must be all-white, or at least almost all-white.
- Players must bow or curtsy if HRH The Prince of Wales or Her Majesty the Queen is present in the Royal Box at Centre Court.



Questions

1. Where is Wimbledon held?

London

Dublin

Edinburgh

Cardiff

2. It has been held there since what year?

1788

1788

1878

1877

3. Tick three.

The other three Grand Slam tournaments take place in:

Africa

France

Australia

America

4. What is special about 'Middle Sunday'?

5. Which court has a roof?

Court No. 1

Court No. 13

Court No. 18

Centre Court

6. The courts are covered in:

clay

grass

tarmac

sand

Questions

7. When must players bow or curtsy?

The gentlemen's singles champion receives

Please select the answer:

The women's singles champion wins a

Please select the answer:

Roger Federer won in

Please select the answer:

Sir Andy Murray first won in

Please select the answer:

8. Players' clothes must be or at least almost all .

Wednesday 24th June

Maths

Teacher Answer Key:

Name _____

Date _____

4th Grade Math Practice: Sports Themed Word Problems

1.) Hakim is shooting baskets. He takes 125 shots, and misses 86 of them. How many shots did Hakim make?

2.) Joey's baseball team played in 34 games during the season. If his team lost 11 times, how many games did they win (there are no tie games in baseball)?

3.) Maya's soccer team played 14 games in their season. They tied 2 games and lost 4 games. How many games did they win?

4.) At a tennis practice, each athlete gets 5 tennis balls from the bin. There are 9 players. If every ball from the bin was given out, how many tennis balls were in the bin?

5.) At baseball practice, each player gets pitches thrown to them from the coach. If the team has 9 players, how many pitches does the coach throw?

6.) Tom's football coach tells him to practice for a total of 40 hours this week. If Tom practices for 6 hours on Monday, 4 hours on Tuesday, and 3 hours on Wednesday, how many hours must he practice the rest of the week to meet the 40 hours total?

7.) Kelly gives out orange slices to her soccer team. If there are 11 players, and they each get 5 orange slices, how many orange slices were given out?

8.) Jimmy is trying to get better at karate. He practices for a total of 5 hours one week. The second week, he practices twice as many hours as the week before. How many hours did Jimmy practice the second week?

English

Summer Olympics 2016 Comprehension

The 2016 Summer Olympics or the Games of the XXXI Olympiad will be held in Rio De Janeiro, Brazil from Friday 5th August to Sunday 21st August 2016. This is the first time the event has been held in South America. As Brazil is in the southern Hemisphere, the Games will actually be taking place in the country's winter!



There are about 10,500 athletes competing, from 206 different countries and territories. South Sudan and Kosovo will be competing for the first time. A number of refugees will compete under the Olympic flag.

There will 306 events over 28 sports. 7 of these sports have a range of disciplines. Rugby Sevens is included for the first time. Golf returns after a 112 year absence: it was last played at the Olympics in 1904.

7.5 million tickets will be sold to watch the events. The opening and closing ceremonies will be held in Rio's Maracanã Stadium.

What other name is used for the 2016 Summer Olympics?

Where are the game being held?

How many athletes and countries will be competing?

Which countries are competing for the first time?

Which sport is part of the Olympics for the first time since 1904?

How many tickets will be sold?

© www.ActivityVillage.co.uk - Keeping Kids Busy

Activity
village

Thursday 25th June Maths



Secret Multiplication Word Puzzle
Pirates - Nines

Name: _____
Date: _____

INSTRUCTIONS: Multiply each number. Then match the answer to the letter in the Secret Message alphabet key. Write the letter on the blank above the problem number.

1 $\begin{array}{r} 9 \\ \times 6 \\ \hline \end{array}$	2 $\begin{array}{r} 1 \\ \times 9 \\ \hline \end{array}$	3 $\begin{array}{r} 9 \\ \times 8 \\ \hline \end{array}$	4 $\begin{array}{r} 6 \\ \times 9 \\ \hline \end{array}$	5 $\begin{array}{r} 9 \\ \times 9 \\ \hline \end{array}$
6 $\begin{array}{r} 9 \\ \times 7 \\ \hline \end{array}$	7 $\begin{array}{r} 9 \\ \times 3 \\ \hline \end{array}$	8 $\begin{array}{r} 4 \\ \times 9 \\ \hline \end{array}$	9 $\begin{array}{r} 9 \\ \times 9 \\ \hline \end{array}$	10 $\begin{array}{r} 3 \\ \times 9 \\ \hline \end{array}$
11 $\begin{array}{r} 0 \\ \times 9 \\ \hline \end{array}$	12 $\begin{array}{r} 9 \\ \times 2 \\ \hline \end{array}$	13 $\begin{array}{r} 9 \\ \times 0 \\ \hline \end{array}$	14 $\begin{array}{r} 9 \\ \times 1 \\ \hline \end{array}$	15 $\begin{array}{r} 5 \\ \times 9 \\ \hline \end{array}$
16 $\begin{array}{r} 9 \\ \times 5 \\ \hline \end{array}$	17 $\begin{array}{r} 8 \\ \times 9 \\ \hline \end{array}$	18 $\begin{array}{r} 7 \\ \times 9 \\ \hline \end{array}$	19 $\begin{array}{r} 9 \\ \times 4 \\ \hline \end{array}$	20 $\begin{array}{r} 2 \\ \times 9 \\ \hline \end{array}$

 7
 16
 3
 13
 4
 5

 19
 15
 18
 2
 20

Secret Message Alphabet Key												
A= 45	B= 12	C= 35	D= 0	E= 9	F= 24	G= 20	H= 54	I= 28	J= 15	K= 32	L= 27	M= 36
N= 72	O= 81	P= 64	Q= 49	R= 4	S= 3	T= 63	U= 6	V= 40	W= 5	X= 7	Y= 18	Z= 25

www.MULTIPLICATION.com

English

Name _____

Date _____

Who Am I? Women in Sports

Directions: Read each description below. Then, use books and digital research tools to help you match the athlete to the description. Cut and paste the athlete's image and name to the correct description. Then, conduct further research using the instructions below.

Research Directions:

- Research one of the athletes online and/or by finding books at the library.
- Next, create a blog, piece of writing, poster, or artwork to teach others about what you learned.

<p>I was born in 1985, and I am a professional soccer player. I am the captain for the United States women's national soccer team and for my team in the National Women's Soccer League. Being a captain means that I am a leader for my teammates. I have played in World Cup tournaments and the Olympics. I am a voice for equal rights for all people, and an advocate for equal pay for women.</p>	<p>Who am I?</p>
<p>I was born in 1940, and grew up in Tennessee. When I was four years old, I had polio, which caused me to lose the use of my left leg. I was able to walk again when I was 11 years old. In high school, I was a star basketball player and never lost a race for the track team. I competed in the Olympics, and became the first American woman to win three gold medals in track and field at a single Olympics.</p>	<p>Who am I?</p>
<p>I was born in 1905, in New York. I was a champion swimmer by the time I was a teenager. I competed in the 1924 Olympics in Paris, where my team won three medals. In 1925, I began training to swim across the English Channel, which is 21 miles between England and the European mainland. In 1926, I achieved my goal of becoming the first female to swim the English Channel.</p>	<p>Who am I?</p>
<p>I was born in 1961, and I am an American professional tennis player. Between 2002 and 2017, the Women's Tennis Association ranked me as the number 1 tennis player in singles. I have also played many doubles tennis matches with my sister, who is also a professional tennis player. I have won four Olympic gold medals. In 2015, I was named Sportsperson of the Year by <i>Sports Illustrated</i> magazine.</p>	<p>Who am I?</p>



Serena Williams



Gertrude Ederle



Wilma Rudolph



Megan Rapinoe



Friday 26th June

Maths


Draw the dots on a piece of paper.



Puzzle time

Four lines

Now this really does need some imaginative thinking -
but it is possible!!

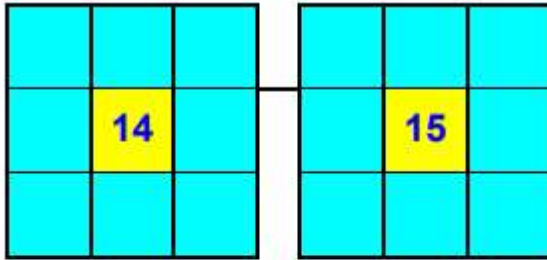
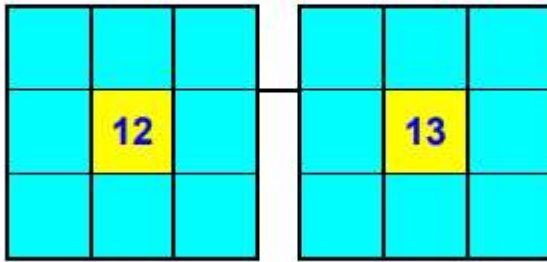


Can you join all nine dots
with four straight lines,
without taking your pencil
off the paper?
You can not go over any
line twice.



Puzzle time

12 to 15



Can you put the numbers 1 to 8 in each of the squares so that each side adds up to the middle number?




English

Word Wheel

Targets

Good 10+
Excellent 15+
Outstanding 20+

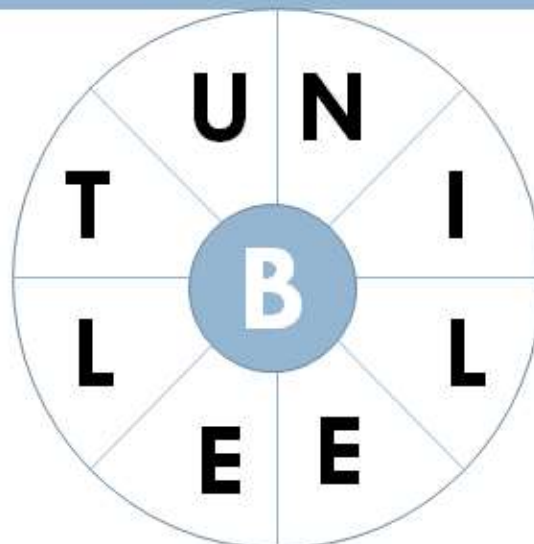


Find as many words as possible using the letters in the wheel. Each word must use the hub letter and at least 2 others. Letters can be only used once. There's a 9 letter word. Clue- dance like a nervous insect.

Word Wheel

Targets

Good 10+
Excellent 15+
Outstanding 20+



Find as many words as possible using the letters in the wheel. Each word must use the hub letter and at least 2 others. Letters can be only used once. There's a 9 letter word.

Monday 29th

Maths

1. Jia, Bisma, Sadie, Nikita and Felix scored ten points each for the red team. How many points does the red team have so far?



2. The blue team had 32 points before Lowri scored 7 points in the hurdles. How many points do they have now?

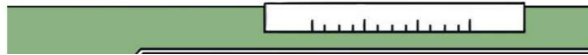


4. There have been 33 running races so far. Write the number as a word.




5. Marcel jumped 48cm, Neville jumped 55cm and Gethin jumped 52cm in the long jump. Compare these jumps by filling in the gaps below with the signs $<$ and $>$.

Marcel's jump Neville's jump
Neville's jump Gethin's jump
Gethin's jump Marcel's jump

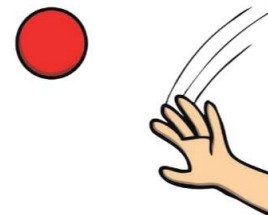


6. These are the scores from today's three-legged race:



Which team had the highest score and which team had the lowest score?


7. Jia, Rasha, Carter, Turkan, Mei and Aisha each threw the ball once. Each throw scored 3 points. How many points did they score altogether?



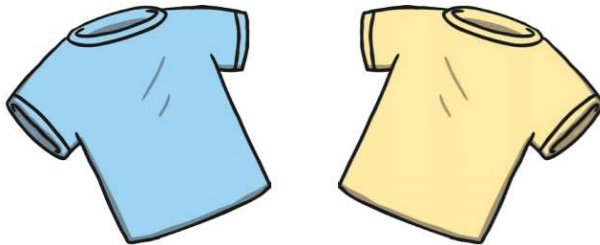
8. At half time, the yellow team was scoring 87 but they had to have 24 points taken off. What was the yellow team's real score?



9. There were 9 activities, which each needed 5 cones. How many cones did they need altogether?




10. At the start of the day, 35 bibs were shared out between the 5 teams. How many bibs did each team have?



Sports Day

Unscramble the words below and write the answers on the lines.

1. rostp _____
2. geg dna onosp _____
3. askc ecar _____
4. ginkipps _____
5. serac _____
6. nirngun _____
7. lehrdus _____
8. gratet _____
9. owrth _____
10. yrlea _____
11. gonl pmuj _____
12. lnijeav _____



Tuesday 30th June

Maths

1. Legs on a bus

1. *There are 7 girls on a bus.*
2. *Each girl has 7 backpacks.*
3. *In each backpack, there are 7 big cats.*
4. *For every big cat there are 7 little cats.*

How many legs are on the bus, not counting the driver?

1. Pentagon & star

How many triangles are there?

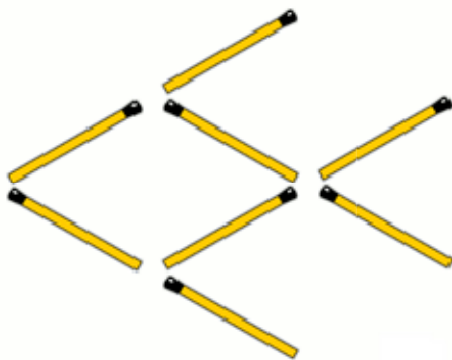
3) Coin triangle

Move only three coins and turn the triangle upside down.


[Click here for the answer](#), but not before you've thought about it!

4) Turn the fish

Move three sticks and make the fish to swim in the opposite direction. You can see the solution and play an [interactive version of this puzzle](#) at Puzzles.com (and many others too!).



5) Dots in a square



This is one of my favorites! It is a simple puzzle, but illustrates beautifully the idea of "thinking outside the box."

Join all the dots using four straight lines and without lifting your pencil.

[Click here for the answer](#), but think about it first!

