

3rd Class

Answers Week 9 (8th-12th June)

MONDAY

1. 5 o'clock.



2. What 2 shapes come next?



3. $3 \times 4 =$ 12



4. Name this 2-D shape.

an irregular hexagon

5. $6 + 3 + 5 =$ 14

6. A pencil is **lighter** **heavier** than 1 kg.

7. Write the numeral
three hundred and three. 303

8. $18 - 8 =$ 10

9. $8 \times 4 =$ 32

10. Share €50.00 equally among 5 teachers.

€ 10.00 each

11. 4, 9, 14, 19, 24

12. $400 + 300 =$ 700

13. Measure the snail's trail. 4 cm



14. $11 - 7 =$ 4

15. Sum of 7 and 7 = 14

16. 90 minutes = 1 hour(s)

30 minute(s)

17. $200 \text{ mL} + 400 \text{ mL} +$ 400 mL = 1 L

18. $\text{€}2.50 + \text{€}0.25 = \text{€}$ 2.75

19. $9 \times 4 =$ 36

20. $\text{€}2.63 =$ 263 c

English

Activity 1: Comprehension Strategy: Visualising

Send an email to your teacher with the picture of your visualisation.

Activity 2: Questions

1. Christina is the main character of the story.
2. The girl ate a blueberry from the bush because she heard a voice softly telling her to do it.
3. When Christina ate the blueberry she started shrinking.

Activity 3: Dictionary Work

- a. Strolling- walk in a leisurely way.
- b. gazed- look steadily and intently, especially in admiration, surprise, or thought.
- c. dainty- delicately small and pretty.
- d. Magnificent- extremely beautiful, elaborate, or impressive.
- e. automatically- by itself with little or no direct human control; without conscious thought or attention; spontaneously.

Activity 4:

Send a picture of the new paragraph describing what Christina saw beyond the tiny door to your teacher!

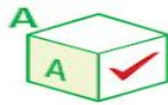
TUESDAY

1. Half past 10.



2. $8 \div 4 = \underline{2}$

3. Tick the cube with an **A** on its left side.



4. $6 + 7 = \underline{13}$

5. $20 \div 4 = \underline{5}$

6. $12 - \underline{5} = 7$

7. Humans sleep horizontally vertically.

8. In 480, what is the place value of the 4?

hundreds tens units

9. 250, 300, 350, 400, 450, 500

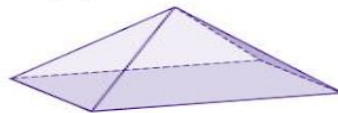
10. $5 \times 4 = \underline{20}$

11. 100 minutes = 1 hour(s)
40 minute(s)

12. How many faces has this pyramid?

5

13. €3.49 = 349 c



14. Find the size of the missing sides.

$a = \underline{8}$ m

$b = \underline{3}$ m



15. €1.50 + €2.50 = € 4.00

16. $7 \times 4 = \underline{28}$

17. Tick which ones are lighter than 1 kg.

this book

car

pencil

50 pencils

18. $15 - 9 = \underline{6}$

19. $250 + 150 = \underline{400}$

20. Which is the longest?

100 cm

10 m

100 m

WEDNESDAY

1. Quarter to 4.

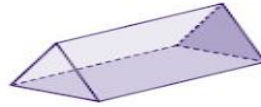


2. What 2 shapes come next?



3. $17 - 7 =$ 10

4. How many faces has a triangular prism? 5



5. 
Length of line? 3 cm

6. $15 -$ 6 $= 9$

7. Sum of 2 and 9 = 11

8. Are you horizontal or vertical when you walk?

vertical

9. $1 \text{ kg} =$ 1000 g

10. Draw a line of symmetry.



11. $5 + 5 + 5 + 5 + 5 = 5 \times 5 =$ 25

12. Divide €44.00 equally among 4 money boxes.

€ 11.00 each

13. $65c + 35c =$ € 1.00

14. $€3.50 - €1.50 =$ € 2.00

15. Write the numeral seven hundred and seventy. 770

16. $410 + 90 =$ 500

17. $1 \times 4 =$ 4

18. $12 \div 4 =$ 3

19. $1 \text{ km} =$ 1000 m

20. $25 + 35 =$ 60

English

Activity 1: Send a picture of your 'Thesaurus Challenge' to your teacher.

Activity 2:

1. The burglar **crept** up the stairs in the middle of night so no one would hear him.
2. The horse **galloped** to the finish line with his jockey on his back.
3. James **hurried** to school because he was going to be late.
4. Katie **sprinted** in the race because she wanted to win the gold medal.
5. The little girl **skipped** happily down the road with her friends.
6. The toddler was having a tantrum so he **stomped** to his room.
7. The baby **crawled** out from under the table and gave the old lady a fright.
8. The mouse **scurried** over to the mouse trap to get some cheese.
9. Ella **hobbled** inside after break because she hurt her ankle at lunchtime.
10. The soldiers **marched** into battle heroically.

Music

Send your 'Home Walk' video to your teacher.

THURSDAY

1. Quarter past 8.

2. $2 \times 4 = \underline{8}$

3. $16 \div 4 = \underline{4}$

4. $10 \times 10 = \underline{100}$

5. 3  at 50c each. Total cost = € 1.50



6. Write the numeral four hundred and forty. 440

7. $25 + 45 = \underline{70}$

8. $18 - 7 = \underline{11}$

9. 1 L = 1000 mL

10. Sum of 12 and 9 = 21

11. $600 - 350 = \underline{250}$

12. Is this symmetrical? no



13. 110 minutes = 1 hour(s)
50 minute(s)

14. **Clockwise** or **anticlockwise**?



15. What 2 shapes come next?



MONDAY	TUESDAY	WEDNESDAY	THURSDAY	FRIDAY
Maths	Maths	English	English	English
B	R	E	A	K
English	English	Maths	Maths	Maths
L	U	N	C	H
Science	P.E.	History	Art	Gaeilge
Gaeilge	Music	Gaeilge	SPHE	Geography

16. Which lesson is last on Thursday? SPHE

17. Which lesson is after lunch on Wednesday? History

18. How many English lessons are there in one week? 5

19. Which lesson is before lunch on Friday? Maths

20. How many lessons are there over the week? 20

English

Send a picture of your plan to your teacher by email.

SPHE

send photos of your Rainbow Breathing picture onto your teacher.

FRIDAY REVIEW

1. Quarter past 7.



2. $45 + 25 = \underline{70}$

3. $12 - 9 = \underline{3}$

4. $350 + 250 = \underline{600}$

5. Tick which shape will stack.



6. Divide €100 equally among 10 children.

€ 10 each

7. $4 \times 4 = \underline{16}$

8. $20 \div 4 = \underline{5}$

9. €4.25 = 425 c

10. The date is Monday, the 4th of August.

What day will the 7th of August be?

Thursday

11. $18 - \underline{7} = 11$

12. $4 \times 8 = \underline{32}$

13. Measure the snail's trail.



1 cm

14. 120 minutes =

2 hour(s)

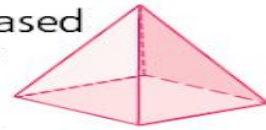
0 minute(s)

15. The crossbar of a goalpost is

vertical **horizontal**.

16. How many faces has a square-based pyramid?

5



17. $6 \times 4 = \underline{24}$

18. 4, 7, 10, 13, 16

19. €2.50 + €3.50 =
€ 6.00

20. $500 - 150 = \underline{350}$



21. Find the size of the missing sides.

$a = \underline{9}$ m

$b = \underline{2}$ m

22. Write the numeral two hundred and forty-five.

245

23. What 2 shapes come next?



24. A bag of 3 oranges costs €5.

How many oranges for €20?

12

25. $24 \div 4 = \underline{6}$

English

Send a picture of your story to your teacher by email.

Visual Arts

Send your teacher a picture of your 'Draw your heroes' image/writing.

Mr. Kelly

Monday

Narrative writing

- **Who are the characters in the story**
The characters in the story were the 3 bears and Goldilocks.
- **Where is the setting of the story**
The setting of the story is in a forest.
- **What is the conflict in the story**
The conflict in the story is between Goldilocks and the 3 bears.
Goldilocks breaks into the bears house and eats their food, breaks some furniture and sleeps in their bed.

Tuesday

The boy who cried wolf

1. The boy was minding sheep on the hill.
2. The boy played a trick because he was trying to be funny.
3. The people were cross with the boy because they came up the hill and there was no wolf at all.
4. The people did not come running the second time because they thought the boy was playing a trick again.
5. I think the boy learned his lesson because he lost a sheep to the wolf and he didn't want that to happen again or he wanted the people to believe him in the future if he has a problem like this again.

Wednesday

Grammar

Alphabetical Order



Fill in the missing letters.

1. A B C D E

2. F G H I J K L M

3. N O P Q R S

4. T U V W X Y Z



Put these words into alphabetical order. If more than one word starts with the same letter, look at the next letter in each word.

1. rabbit hamster dog cat



cat dog hamster rabbit

2. swing bat bike toy

bat bike swing toy

3. Tyrone Sam Ted Billy Tom

Billy Sam Ted Tom Tyrone

4. avocado peach apple orange plum

apple avocado orange peach plum

5. chin clap cake cut coat crayon

cake chin clap coat crayon cut

6. stop scar skin second sack shell

sack scar second shell skin stop

Thursday

Italy

1. The language they speak in Italy is Italian.
2. In Italy they eat pasta, spaghetti and pizza.
3. A big city in Italy is called Rome which is the capital city.
4. People go to Rome to see all the old buildings such as the Colosseum.
5. Italians love cooking as much as football.

Friday

Summer Picnic

1. There are ten kinds of food on the list.
2. There are six different types of drinks on the list.
3. A tin-opener is for opening tins of food.
4. They will put their rubbish into a rubbish bag.
5. There are four people going to the picnic as there are only four deckchairs.