

6th Class Work 11th January- 15th January

Dear Parents/Guardians,

I hope you are all safe and well. Please find the work for the week of the 11th January. As you are aware by now, schools will remain closed to students until further notice by the Government so we will have to resume our learning remotely. The staff have developed contingency plans for this situation and these will be in place from now on. The teachers have met and are well prepared to support distance learning from this week onwards. Teachers will be in touch on a weekly basis and there will be class meetings once a week to support pupils in their learning.

We are acutely aware that this is a stressful time for everyone and that this arrangement can present significant challenges in different family contexts. It is important to remember that you can only do what you can do. Please don't feel overwhelmed by the work that is being sent. The work is designed to make things more manageable at home, provide the children with some degree of structure and continue the pupil's learning as outlined in the curriculum and the school plans. Health and wellbeing come first.

Engagement and feedback is very important to us as a school. This is in order to help all members of the school community learn, improve and develop the online learning experience. We, as teachers, would be appreciative if the pupils could email us examples of their work and any questions relating to the work. As ever there is no pressure on you as parents to do this.

Email addresses:

1. Mr Rennick- jrennick@staidanssns.ie
2. Ms O'Reilly- moreilly@staidanssns.ie
3. Ms Clingan uclingan@staidanssns.ie
4. Ms McCague emccague@staidanssns.ie
5. Ms Daly- kdaly@staidanssns.ie
6. Ms. Bergin sbergin@staidanssns.ie
7. Mr Martin fmartin@staidanssns.ie
8. Ms Byrne mbyrne@staidanssns.ie

[Click here to return to the timetable](#)

[Click on the work in the timetable to take you directly to the correct page. You may then need to click on the word \[Bookmark\]\(#\)](#)

Timetable

	Monday	Tuesday	Wednesday	Thursday	Friday
P.E (Weekdays 9am)	P.E with Joe Wicks Aim to get out and be active for 30 mins per day	30 mins physical activity with family- walk, run, cycle, football etc.	P.E with Joe Wicks Aim to get out and be active for 30 mins per day	30 mins physical activity with family- walk, run, cycle, football etc.	P.E with Joe Wicks Aim to get out and be active for 30 mins per day
Maths	Addition and Subtraction	Multiplication and Division	Fractions	Place Value +	Number, shapes, angles
	B	R	E	A	K
English	My Christmas Break	New Year traditions around the world	My New Year's Resolutions	Sentences	New Year's Wordsearch
	L	U	N	C	H
Gaeilge	Laethanta na seachtaine	Mé Féin	'do'	Bia	Éadaí/Dathanna
SESE/Arts	Geography: Game	Geography: Countries of Europe	Geography: Counties of Ireland	Art: Back to school! How to draw a stack of books, an apple and pencils.	Music: Song Singing

[Click here to return to the timetable](#)

Monday- Maths

$\begin{array}{r} \text{THTU} \\ 438 \\ - \underline{122} \end{array}$	$\begin{array}{r} \text{THTU} \\ 537 \\ - \underline{326} \end{array}$
$\begin{array}{r} \text{THTU} \\ 2758 \\ + \underline{3531} \end{array}$	$\begin{array}{r} \text{THTU} \\ 6978 \\ + \underline{1756} \end{array}$
$\begin{array}{r} \text{THTU} \\ 7878 \\ - \underline{361} \end{array}$	$\begin{array}{r} \text{THTU} \\ 8538 \\ - \underline{521} \end{array}$

$\begin{array}{r} \text{THTU} \\ 7430 \\ + \quad \underline{6100} \end{array}$	$\begin{array}{r} \text{THTU} \\ 9438 \\ + \quad \underline{1789} \end{array}$
--	--

Monday – English

How was your Christmas break? Use the following headings to organise your thoughts. You can write the headings out on a page and email a photo to your teacher.

Christmas Holidays Writing Report

I watched... I received...

I visited... I ate...

I gave...

Monday- Gaeilge

Laethanta na Seachtaine

1. Practise saying the 'Days of the Week' as Gaeilge:

An Luan

An Mháirt

An Chéadaoin

An Déardaoin

An Aoine

An Satharn

An Domhnach

2. Listen to this video to help you answer the question below

<https://www.youtube.com/watch?v=vM43h2z38oo>

Cén lá atá ann inniu? (What day is it today?)

Inniu an Luan.

3. In your copy, or on a page, write the day that comes **before** and **after** each day.

Inné	Inniu	Amárach
	An Chéadaoin	
	An Aoine	
	An Domhnach	
	An Satharn	
	An Mháirt	
	An Déardaoin	
	An Luan	

[Click here to return to the timetable](#)

4. Answer the following questions orally:

Cén lá a bhí ann inné? (What day was it yesterday?)

Inné an Domhnach.

Cén lá a bheidh ann amárach? (What day will it be tomorrow?)

Amárach an Mháirt.

Monday - Geography

Click on the link below to play an interactive online geography game. Can you get 10 out of 10?!

https://world-geography-games.com/europe_uk_ireland.html

Tuesday- Maths

1. Lucy shares 42 marbles between her and her 6 friends. How many does each child get?

2. In each box there are 6 eggs. How many in 6 boxes of eggs?

3. HTU	4. HTU	5. $6 \sqrt{678}$	6. $7 \sqrt{3948}$
345	785		
<u>X 5</u>	<u>x 9</u>		


[Click here to return to the timetable](#)

Tuesday – English

Please read through this article on New Year's traditions around the world and answer the questions at the end. You can take a photo of the answers and email it to your teacher.


New Year Traditions Around the World

How do you ring in the new year? People in many countries shoot fireworks into the sky at midnight. This is common for people in Australia and the United States. They celebrate the passing of another year. Other people eat with friends and neighbors as a way to hope for good luck. Whether you throw a party with friends and family or participate in other unique traditions, honoring the new year can be a great way to think about the past and hope for a bright future.



Out with the Old, in with the New

In many countries, it is important to make space for new and good things to come. People in different regions have different ways of doing so. In many cultures, people get rid of old things to make room for new. Burning Christmas trees to show the end of the Christmas season is one common way of doing this. People in some countries throw out their old or used household goods and items. Many people stay up until midnight on New Year's Eve. This way they can be awake to celebrate the old year and begin the new year.




Cleansing Waters

Other countries celebrate the new year by using water as an important symbol. Some people splash water on each other to bring good luck. Others throw water out of their windows to send away evil spirits.

Celebrating with Parties and Food


In many cultures, people enjoy good food with their loved ones. Festive meals and desserts are a way to celebrate the past and the future. During New Year's Eve parties, people often listen or watch a countdown to the new year.



Bizarre Traditions

What may seem strange to you, might be

tradition to someone else! In Canada, some people celebrate the new year by jumping into the icy waters of the English Bay. They brave the icy, cold waters to bring an end to the year that has passed. These traditions are all done in good fun. The important thing about celebrating the new year is thinking about the previous year and setting goals for the future.



[Click here to return to the timetable](#)

Questions

1. What is the main idea of the text?
 - To explain ways to clean
 - To describe different New Year traditions
 - To describe various food
 - To describe various cultures
2. What is an example of a New Year's tradition mentioned in the text?
 - Praying
 - Singing
 - Playing
 - Cleaning
3. Why do people in some countries burn their Christmas trees?
 - To signify the end of Christmas
 - To keep warm
 - To give off bright light
 - To clear out space
4. Why do people in some countries splash water on each other?
 - To clean each other
 - To bring each other good luck
 - To surprise each other
 - To play games
5. What are some things you do with your family to celebrate the new year?

Tuesday – Gaeilge

Mé Féin- Myself

Practise these questions and answers orally.

Then, write down the answers that suit you in a copy or on a page.

1. Cad is ainm duit? (what is your name?)

_____ is ainm dom. (My name is _____)

2. Cén aois thú? (what age are you?)

Tá mé aon bhliain déag d'aois (I am 11 years old)

Tá mé dhá bhliain déag d'aois (I am 12 years old?)

[Click here to return to the timetable](#)

3. Cén dath atá ar do ghruaig? (What colour is your hair?)

Tá gruaig fhionn orm. (I have blonde hair)

Tá gruaig dhonn orm. (I have brown hair)

Tá gruaig dhubh orm. (I have black hair)

Tá gruaig rua orm. (I have red hair)

4. Cén dath atá ar do shúile? (What colour are your eyes?)

Tá súile glasa agam. (I have green eyes)

Tá súile donna agam. (I have brown eyes)

Tá súil gorma agam. (I have blue eyes)

Rewrite these paragraphs by filling in the blanks. Use the pictures to help!

8 - Ocht mbliana d'aois	9 - Naoi mbliana d'aois	10 - Deich mbliana d'aois			
					
gruaig fhionn	gruaig dhonn	gruaig rua	súile gorma	súile donna	súile glasa

 8	1. Tá mé ocht mbliana d'aois. Tá gruaig dhonn orm. Tá súile gorma agam.
 9	2. Tá mé _____ d'aois. Tá gruaig _____ orm. Tá súile _____ agam.
 10	3. Tá mé _____ d'aois. Tá gruaig _____ orm. Tá súile _____ agam.
 10	4. Tá mise _____ d'aois. Tá gruaig _____ orm. Tá súile _____ agam.

Tuesday- Geography

Countries of Europe

Study the map of Europe below and try to remember as many names and locations of the countries in Europe.



Click on the link below to play a game, see how many you can name and locate on the map. If you get stuck you can use this map of Europe to help you.

https://www.toporopa.eu/en/countries_of_europe.html

[Click here to return to the timetable](#)

- Q1. What country has recently left the European Union?
 Q2. What is this called?
 Q3. Research how this might impact Ireland and write down 3 things about what you have found out about this.

Wednesday-Math

LO – To find equivalent fractions

M. Watson

(1)

$$\frac{1}{2} = \frac{\quad}{\quad}$$

(2)

$$\frac{1}{2} = \frac{\quad}{\quad}$$

(3)

$$\frac{1}{2} = \frac{\quad}{\quad}$$

(4)

$$\frac{1}{3} = \frac{\quad}{\quad}$$

(5)

$$\frac{2}{3} = \frac{\quad}{\quad}$$

(6)

$$\frac{1}{4} = \frac{\quad}{\quad}$$

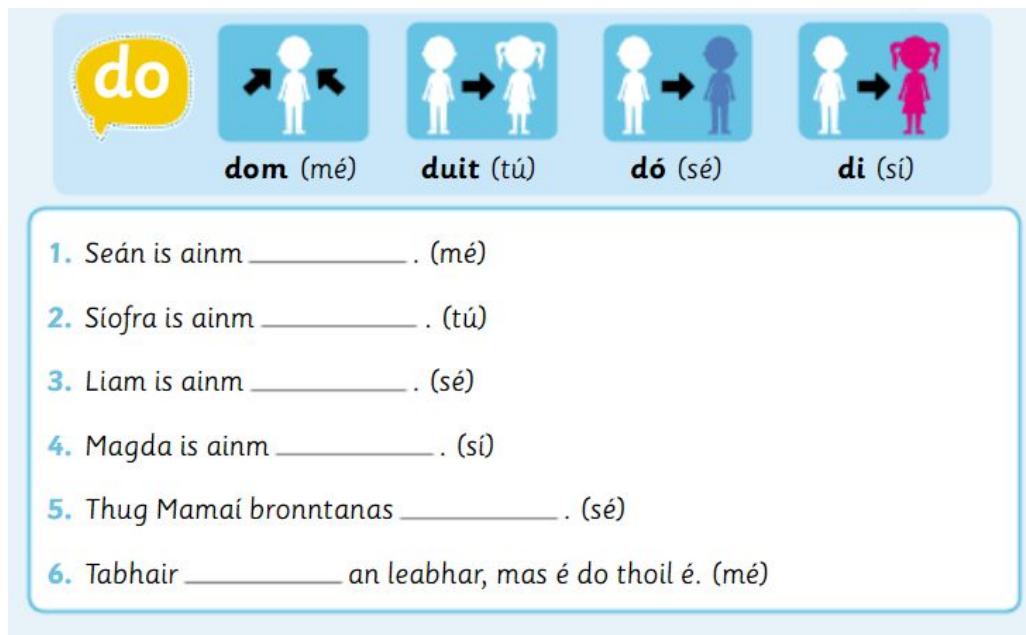
Wednesday – English

It is a New Year and for many people, a new beginning. Do you have any New Year's resolutions? Are there any challenges or goals that you have set for yourself this year? Can you describe what they are and why you have chosen them? Write them out on a page and email a photo to your teacher.

Wednesday – Gaeilge

'Do'

Write out these sentences and fill in the blanks with the correct word.



do **dom** (mé) **duit** (tú) **dó** (sé) **di** (sí)

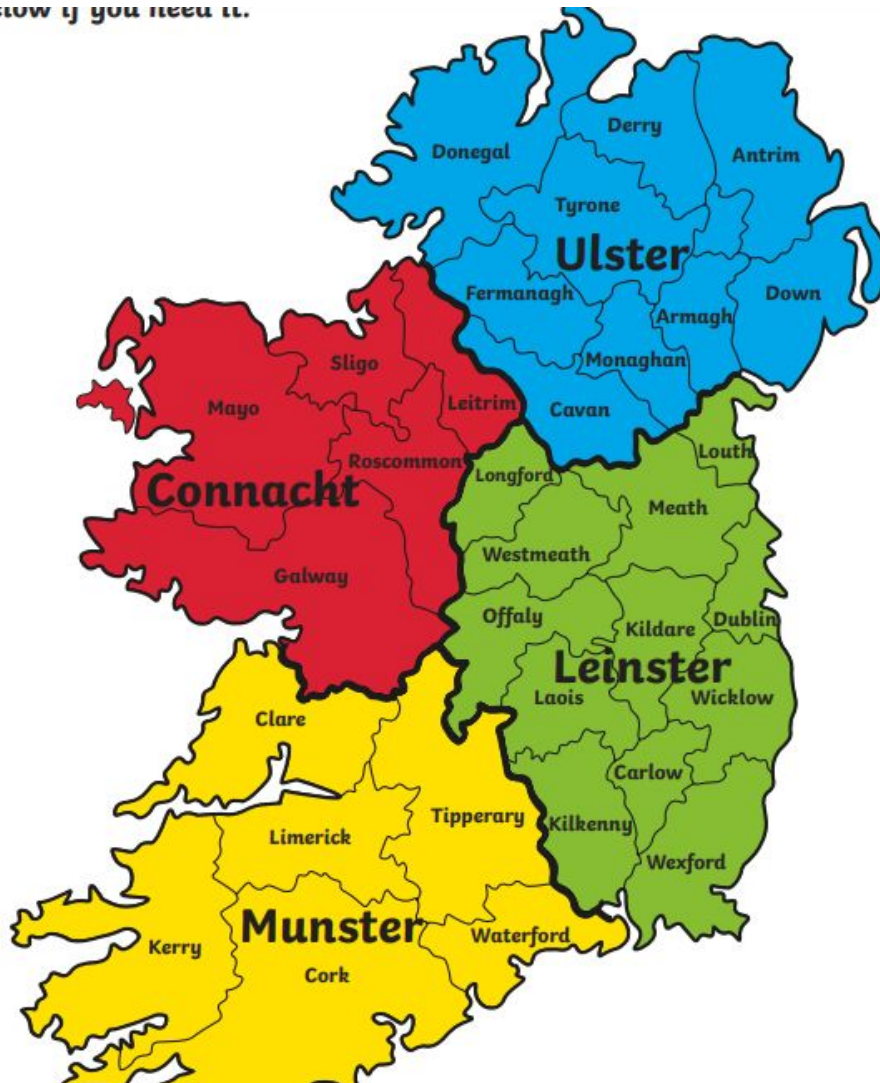
1. Seán is ainm _____. (mé)
2. Síofra is ainm _____. (tú)
3. Liam is ainm _____. (sé)
4. Magda is ainm _____. (sí)
5. Thug Mamáí bronntanas _____. (sé)
6. Tabhair _____ an leabhar, mas é do thoil é. (mé)

Extra Challenge

1. Can you translate the sentences into English?
2. Can you create new sentences for the people you live with?

Wednesday - Geography

below if you need it.



1. How many counties are in Ireland?
2. What is the capital of Ireland?
3. Name a city in Northern Ireland.
4. What are the 4 provinces of Ireland?
5. What province has the least amount of counties?
6. What province has the most counties?
7. What province is Dublin in?

Extra Challenge: Click the link, it will bring you to a game where you can try to name and locate the counties of Ireland.

Send a picture of your completed puzzle to your teacher.

[Click here to return to the timetable](#)

Thursday - Maths

Write the following as numbers

1. Three hundred and forty seven = 347
2. Nine thousand , six hundred and twelve = _____
3. Twenty thousand, and three = _____
4. Eight million, four hundred and seventy one thousand, two hundred and nine =

Write the following in words

5. 9,234 = Nine thousand , two hundred and thirty four
6. 34,803 = _____
7. 769,381= _____
8. 5,952,008= _____

Fill in the next 3 numbers

9. 18,098, 18,099, _____, _____, _____
10. 30,998, 30,999, _____, _____, _____
11. List the prime numbers between 1 and 20
____, ____ , ____ , ____ , ____ , ____ , ____ , ____
12. Which of these numbers are composite? 13, 25, 400, 19, 3456, 23, 45,708
13. If a number ends in zero , is it prime or composite? _____
14. List the factors of 12 ____ , ____ , ____ , ____ , ____ , ____
15. What is the value of 6 in 76,304 ? _____
16. Double the following numbers 8.5 = _____, 12.6= _____ 40.09 = _____ 5.25= _____
17. $3 \times 4 = \underline{\quad} \times 6$ $9c + 1 = 19$ so $c = \underline{\quad}$ $3y + 2 = 14$ so $y = \underline{\quad}$
18. $98 \times 0 = \underline{\quad}$ $3498 \times 1 = \underline{\quad}$ $45 \times 10 = \underline{\quad}$ $4.56 \times 10 = \underline{\quad}$
19. If I divide 304 by 5 , will there be a remainder? _____

20. Multiply your age by 2, then add 10, now half this number and subtract 5. What do you notice about your answer? Try this sum with other family members.

Thursday – English




Can you put the following words into sentences? Write them out on a page and email a photo to your teacher.

1. resolution
2. change
3. develop
4. growth
5. improvement
6. beginning




Thursday - Gaeilge

Bia - Food

1. Dathaigh an bia - Colour the food

		
<i>cairéad</i>	<i>seacláid</i>	<i>úlla</i>

[Click here to return to the timetable](#)

		
<i>burgaire</i>	<i>banana</i>	<i>milseáin</i>

2. Freagair na ceisteanna - answer the questions

An maith leat ____?

Do you like ____?

Is maith liom _____.

I like _____.

Ní maith liom _____.

I do not like _____.

Mar shampla: An maith leat burgaire?

Is maith liom burgaire (✓)

Ní maith liom burgaire (X).

1) An maith leat banana?

2) An maith leat milseáin?

3) An maith leat úlla?

4) An maith leat cairéad?

5) An maith leat seacláid?

[Click here to return to the timetable](#)

Thursday Art

Watch the youtube link below on how to draw these things from school :



<https://youtu.be/kdS8CoXXVAq>

You will need....

- A blank sheet of paper
- A pencil or sharpie
- A rubber
- Some markers or colouring pencils

After you've finished....

We would love to see your finished artworks. You can upload them onto the app or email a photo of your drawing to your teacher!

[Click here to return to the timetable](#)

Friday Maths

- $2^2 = \underline{\quad}$ $6^2 = \underline{\quad}$ $11^2 = \underline{\quad}$ $2^3 = \underline{\quad}$
- $\frac{1}{2}$ of 32 = $\underline{\quad}$ $\frac{1}{4}$ of 20 = $\underline{\quad}$ $\frac{3}{4}$ of 20 = $\underline{\quad}$
- $10^2 - 5^2 = \underline{\quad}$ $9^2 + 5 = \underline{\quad}$ $100 - 7^2 = \underline{\quad}$
- What do we call a shape with 5 sides? $\underline{\hspace{2cm}}$
- Name 3 quadrilaterals $\underline{\hspace{2cm}}$, $\underline{\hspace{2cm}}$, $\underline{\hspace{2cm}}$
- What type of triangle has 3 lines of different lengths? $\underline{\hspace{2cm}}$
- If two angles of a triangle are 65° and 29° , what size is the third angle?
- What type of angle is 123° ? $\underline{\hspace{2cm}}$
- An angle of 253 degrees is a $\underline{\hspace{2cm}}$ angle.
- Write the following as decimal numbers $3/10 = \underline{\quad}$ $5/100 = \underline{\quad}$
 $9/1000 = \underline{\quad}$ $36/100 = \underline{\quad}$
- Write the following as fractions $0.07 = \underline{\quad}$ $0.008 = \underline{\quad}$
 $0.9 = \underline{\quad}$ $0.53 = \underline{\quad}$ $0.708 = \underline{\quad}$
- Round these numbers to 1 decimal place $6.45 = \underline{\quad}$ $9.438 = \underline{\quad}$ $74.09 = \underline{\quad}$
- Write these fractions as decimals
- $\frac{1}{2} = 0.\underline{\quad}$ $\frac{1}{4} = 0.\underline{\quad}$ $\frac{3}{4} = 0.\underline{\quad}$ $\frac{1}{5} = 0.\underline{\quad}$ $\frac{3}{5} = 0.\underline{\quad}$
 $\frac{1}{8} = \underline{\quad}$ $\frac{3}{8} = \underline{\quad}$
- What change do you get if you have € 50 and spend € 10.95 ? $\underline{\hspace{2cm}}$
- Add $16 + 0.054 + 8 = \underline{\hspace{2cm}}$
- $45 - 0.086 = \underline{\hspace{2cm}}$
- What type of number are the following (whole number, decimal number, proper fraction, improper fraction, mixed number)
 $4\frac{3}{8} = \underline{\hspace{2cm}}$ $9.04 = \underline{\hspace{2cm}}$ $\frac{12}{9} = \underline{\hspace{2cm}}$ $804 = \underline{\hspace{2cm}}$ $\frac{6}{8} = \underline{\hspace{2cm}}$
- $2 > 6$ True or False $0.06 = 6$ tenths T or F $\frac{3}{4} = 0.70$ T or F
- $2+2 = \underline{\quad}$ (Yes, I left the hardest sum till last)

Friday – English

Here is a fun activity for a Friday – a New Year’s wordsearch!

[Click here to return to the timetable](#)

Happy New Year

m c t e r g e r a j k l
s e v e n i n g u v w x
n l m c k e n o l h i j
o e d o t i s l d t u v
i b j u r f s a l f g h
t r l n a i y s a r s t
u a i t d b e y n d e f
l t o d i t v s g p q r
o i s o t s w b s b c d
s o e w i a a e y n o p
e n p n o o i b n z a b
r h d e n t l g e l m n

celebration
Auld Lang Syne
regret
day

resolution
memories
countdown
kiss



new
tradition
evening
toast

Friday - Gaeilge

Éadaí/Dathanna

Lean na treoireacha - Follow the instructions:

[Click here to return to the timetable](#)



Cuir dath dearg ar a gruaig

Cuir dath buí ar a gheansaí

Cuir dath gorm ar a bhríste

Cuir dath dubh ar a bhróga





Cuir dath donn ar a gruaig

Cuir dath glas ar a gheansaí

Cuir dath corcrá ar a bríste

Cuir dath oráiste ar a bróga

							
dearg	buí	gorm	dubh	donn	glas	corcrá	oráiste

			
gruaig	geansaí	bríste	bróga

Music Friday

[Click here to return to the timetable](#)

Listen to 'This Little Light of Mine', sing along with the lyrics and answer the short questions below.

<https://www.youtube.com/watch?v=QCN893hzueQ>

Choose the best answer for each question.

1. Why did the writer keep using the words "Let it shine?"

- a. to rhyme
- b. to tell about being bright
- c. to end with the same words
- d. to keep everything the same

3. What does it mean when the writer says "out in the dark"?

- a. that the light will shine everywhere
- b. that it is dark outside
- c. that it is sad
- d. that it is night time

2. This is a song. Why did the writer keep saying "I" and "me?"

- a. so you know how he feels
- b. so you would feel it was your song
- c. so it is about a person
- d. so it would rhyme

4. What is the light?

- a. what someone feels
- b. a candle
- c. a flashlight
- d. the sun