

6th Class Work 25th January- 29th January

Dear Parents/Guardians,

Please find the work for the week of the 25th January. Please remember the following:

- Teachers will be in touch on Monday and Tuesday.
- There will be daily recordings emailed breaking down the day`s work for the children. Hopefully this will make it easier for them.
- Zoom meetings will be at the scheduled times.
- Teachers will also be sending out this document via email every Monday along with links to relevant sites..
- This document **does not** have to be printed off and pupils can do their work in a copy.
- Please make sure contact details (phone number and email) are up to date.
- Please remember to keep adding to your journal any activities you undertook, thoughts you had or things you got up to.
- Engagement and feedback is very important to us as a school and teachers would be appreciative of work emailed to them. Please see instructions on how to do this on page 2.

Email addresses:

1. Mr Rennick- jrennick@staidanssns.ie
2. Ms O'Reilly- moreilly@staidanssns.ie
3. Ms Clingan uclingan@staidanssns.ie
4. Ms McCague emccague@staidanssns.ie
5. Ms Daly- kdaly@staidanssns.ie
6. Ms. Bergin sbergin@staidanssns.ie
7. Mr Martin fmartin@staidanssns.ie
8. Ms Byrne mbyrne@staidanssns.ie

[Click here to return to the timetable](#)

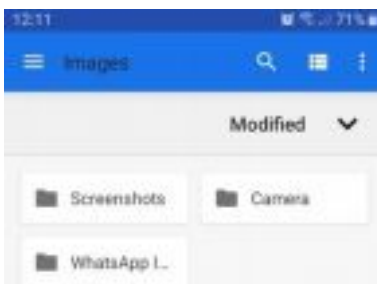
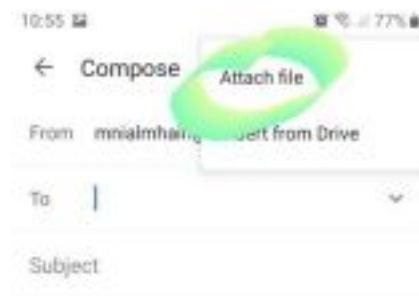
How to send your teacher your work:

There are a few ways to do this – here are the steps for one of the ways:

1. Take a photo of your work on your phone camera.
2. Open your email on your phone. Look at the bottom of the screen and click the tab marked “Compose”.

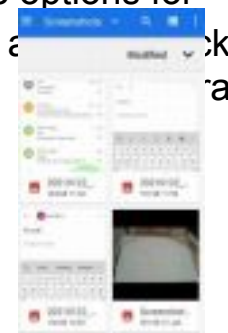


3. Fill in the person you are sending the email to: 4. Click on the paper clip tab - at the top on the right.



5. Click on “attach file”

6. This will bring you to the options for attaching - pick images, a



7. Then click on the images you wish to send in your email.

(These are the photos I used here today)

[Click here to return to the timetable](#)

Click on the work in the timetable to take you directly to the correct page. You may then need to click on the word [Bookmark](#)

Timetable

| | Monday | Tuesday | Wednesday | Thursday | Friday |
|---------------------------------|--|---|---|--|--|
| P.E (Weekdays 9am) | P.E. with Joe PE With Joe 2021 | Athletics - Hurdling | P.E with Joe | P.E- Dance lesson 2 | P.E. with Joe |
| Maths | Percentages | Percentages | Percentages | Percentages | Percentage- Word Problems |
| SPHE | Making Decisions Lesson 3 | | Making decisions Lesson 4 | | |
| | B | R | E | A | K |
| English | Dictionary Work and Reading | Adverbs and Reading | Prefixes and Reading | Persuasive Writing and Reading | Persuasive Writing and Reading |
| | L | U | N | C | H |
| Gaeilge | Sa siopa éada | Focloir | Ceannaigh - to buy | Tasc eisteachta | Tarraing Ionad Siopadóireachta |
| SESE/Arts | What is a continent? | About the continents. | Antarctica | How to Draw a Penguin | Diary Entry |

[Click here to return to the timetable](#)

Monday- PE

Click on the link below to do PE with Joe!

[PE With Joe | 2021](#)

Monday- Maths


Percentages

Watch this short video to help you with today's Maths Lesson


<https://www.loom.com/share/fd26c96a0d6143f19e878a64d0e495c7>

B What percentage of each shape is (a) coloured and (b) white?

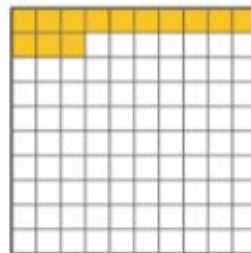
1.




2.



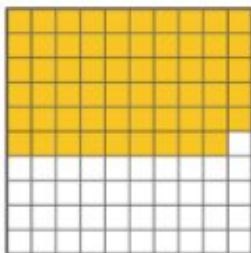
3.




4.



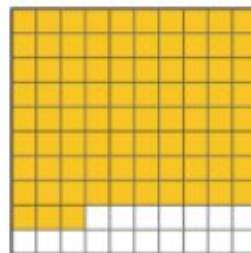
5.




6.



7.



8.



C Write each percentage as a fraction.

- | | | | | | |
|----|---------|---------|---------|---------|---------|
| 1. | (a) 19% | (b) 23% | (c) 9% | (d) 83% | (e) 99% |
| 2. | (a) 71% | (b) 37% | (c) 43% | (d) 25% | (e) 75% |
| 3. | (a) 10% | (b) 30% | (c) 90% | (d) 40% | (e) 80% |



[Click here to return to the timetable](#)

Monday- SPHE

.Record in your copy/ journal

Record (write down) your ideas and thoughts on each of the three topics below.

Ask family members their opinions on the three topics.

Have a family discussion on the three topics and record all thoughts and opinions. Make sure everyone gets their say, are listened to and their thoughts are valued.

Three topics:

1. A gift for a baby
2. Ways to be a good friend
3. Ways to solve an argument

Art: Design a poster/ piece of art based on you and your family's thoughts. Take a picture and send in to your class teachers. It can also be part of your journal.

Any media will be accepted and appreciated by your teachers so be imaginative.

Monday-English

Dictionary words:

Using a book or online dictionary, look up the following words and write out their meaning.

Then pick four words and put them into its own sentence. Remember you don't need to have an actual dictionary at home to do this. Look the word up online!

[Click here to return to the timetable](#)

1. Impact
2. Billionaire
3. Accent
4. Experienced
5. Plummeted
6. Secrecy
7. Capsule
8. Temperature
9. Premonition
10. Winched
11. Atmosphere
12. Reluctant

Reading:

Epic Reading Website

Try to read at least one page of a book everyday.

<https://www.getepic.com/students>

1. Click on Student Log In
2. Click on the Select your Class Icon with the password upq4682
3. Type your name into the search bar
4. Click on the character with your name.
5. Explore the library of books.
6. Select one that you like and Happy Reading.

[Click here to return to the timetable](#)

See video below for further help with logging in.

https://photos.google.com/direct/AF1QipOvH5-YgxSmHXrA7Ppl6G_duDcinJuAmlGf_D4cr0YuuQmM_aFV1uRI6eeMuP4hzA

Monday - Gaeilge

Féach ar an físeán seo sa siopa éadaí nua.

Watch this video of the new clothes shop.

[An siopa eadaí nua.mp4](#)

1. Cad atá i lámh Magda?

a lán éadaí
airgead

a lán criospaí

a lán

2. Cad atá Síofra ag roghnú?

Bróga reatha

t-léine

luiteoga

3. Cén saghas hata atá ar Sheáin?

Hata beag glas

hata deas alainn

hata mór oráiste

[Click here to return to the timetable](#)

4. Cad atá ar Liam?

Spéaclaí gréine

t-léine

stocaí


Monday- SESE

1. Read 'What is a Continent?'

What Is a Continent?

A continent is a very large landmass.
A continent is usually separated by water or other natural features, like mountains.
There are seven continents in the world:

1. Asia
2. Africa
3. North America
4. South America
5. Antarctica
6. Europe
7. Australasia



Let's Find Out More!

Did You Know?
Continents only cover 29% of the Earth. The rest of the Earth's surface is water!

twinkl.com

[Click here to return to the timetable](#)

2. Look at the map below to see the locations of the 7 continents of the world:



3. Continents can be made up of a few or many different countries, by looking at a map, can you name **one** country from each of the following continents?

| Continent | Country |
|--|---------|
| Africa | |
| Asia | |
| North America | |
| South America | |
| Australisa (some people call it Oceania) | |
| Europe | |

[Click here to return to the timetable](#)

4. Click on the link, to play an interactive activity to label the 7 continents of the world.

<https://world-geography-games.com/continents/>

Tuesday- P.E

What you need:

1. Deck of cards
2. Skipping ropes/hurdles
3. Baton/ kitsch rolling pin
4. P.E. journal/ notebook

Aim:

1. To learn more about hurdling
2. Sprints
3. To learn more about movement

Warm up:

1. 5- 10 mins walk and light jog
2. Stretching
3. Suit Shuffle game:
 - Spread out the cards 10-15 yards from a marker.
 - On “go” sprint from the marker to the cards and pick one card.
 - Sprint back to the marker and place your card at the marker.
 - Sprint back to the cards and try to find the first card`s pair.

[Click here to return to the timetable](#)

- If unsuccessful you have to sprint back to the marker and return to cards to find the pair.
- Each person has one minute and the person with the most pairs is the winner.

4. Soccer players can dribble with a football. Record the amount in your journal.

Main activity:

1. Lay out hurdles/ ropes with a three stride gap between each rope.
2. Choose the leg you will lead with. If it is your right leg step out with your left leg or vice versa e.g left, right, left, hurdle (have this rhyme in your head)
3. Remember with a hurdle you don't jump over the hurdle you lift the leg over the hurdle.
4. Practise with one hurdle/ rope and walk through it and add more hurdles/ ropes as you get better.
5. Time your times and how you got on in your journal.

Warm down

1. Stretches
2. Cool down for 5mins.

[Click here to return to the timetable](#)

Tuesday Maths

This is similar to what you did yesterday in maths.

You need to **write each percent as a fraction first (over 100)** and then **break it down to its simplest form by finding one number that will divide equally into the top and bottom number**.

Look at the example in the box to help you.

A Write each percentage as a fraction in its lowest terms.

- (a) 45% (b) 85% (c) 15% (d) 95% (e) 5%
- (a) 80% (b) 20% (c) 10% (d) 30% (e) 90%
- (a) 2% (b) 4% (c) 6% (d) 8% (e) 12%


Example

$$35\% = \frac{35}{100} = \frac{7}{20}$$

For this next part you need to remember that '**less than**' always means to **subtract**. You will need to **take away each of the questions below from 100%** to find your answer.

How much less than 100% is each of these test results? **Example: 75% Answer 25%**

- (a) 70% (b) 25% (c) 30% (d) 60% (e) 10%
- (a) 42% (b) 56% (c) 88% (d) 33% (e) 7%
- (a) 19% (b) 2% (c) 50% (d) 5% (e) 0.5%



Tuesday-English

Grammar-Adverbs

What is an adverb?

An adverb is a word that tells us more about a verb. A verb is an action word.

[Click here to return to the timetable](#)

Complete the exercise below.

Lesson 2: Fill in the Gap

Complete the sentences with the best adverb using the wordbank to the right.

Hint: Not every adverb is needed.

1. Come here _____. You have to see this!
2. We knew that she had got the job when we saw her _____ talking on the phone.
3. He _____ put the vase on the table. It fell to the floor.
4. Sharon is throwing a party on Saturday. She _____ finished her PhD.
5. Let's walk _____. I don't want to be the first one at the meeting.
6. Alex _____ put up the bookshelves. It was too difficult for me to do on my own.
7. Everything happened so _____. We had to move to California in less than a month.
8. Why does he always have to talk so _____. You can hear him in the next room!
9. Although she speaks five languages, she did not do _____ on the translation exam.
10. I was so surprised. His new apartment was _____ decorated.

| | |
|-------------|-----------|
| slowly | easily |
| carefully | excitedly |
| beautifully | finally |
| well | suddenly |
| loudly | quickly |
| carelessly | quietly |



Reading:

Epic Reading Website

[Click here to return to the timetable](#)

Try to read at least one page of a book everyday.

<https://www.getepic.com/students>

1. Click on Student Log In
2. Click on the Select your Class Icon with the password upq4682
3. Type your name into the search bar
4. Click on the character with your name.
5. Explore the library of books.
6. Select one that you like and Happy Reading.

See video below for further help with logging in.

https://photos.google.com/direct/AF1QipOvH5-YgxSmHXrA7Ppl6G_duDcinJuAmlGf_D4cr0YuuQmM_aFV1uRI6eeMuP4hzA

Tuesday- Gaeilge

Sa siopa éadaí

An féidir libh pictiúir agus lipéidí a tharraingt do na rudaí at ar dhíol sa siopa éadaí? Is féidir libh breathnú ar an fiseán seo chun an foclóir a thuiscint.

Can you draw a picture with labels of the things that are for sale in a clothes shop? You can watch the video to help understand the vocabulary.

[Focloir sa siopa eadai.mp4](#)

[Click here to return to the timetable](#)

| | | |
|-----------------|--------------|----------------|
| húdaí | geansaí | t-léine |
| léine | gúna | culaith spóirt |
| bríste géine | luiteoga | riteoga |
| spéaclaí gréine | bróga reatha | buataisí |



[Click here to return to the timetable](#)

Tuesday- SESE

1. Watch this video about the Continents:

[The Continents.mp4](#)

2. Answer the following 10 questions on a page or in your copy. Use the video to help you.

a. How many continents are there?

b. What is the largest continent?

c. What is the smallest continent?

d. Which continent is the **most populated**? (has the largest number of people living there.)

e. Which continent is the **least populated**? (has the fewest number of people living there.)

f. Which continent has the longest river?

g. Which continent is Ireland on?

h. On which continent would you find Kenya?

i. On which continent would you find India?

j. On which continent would you find Brazil?

[Click here to return to the timetable](#)

Monday- PE

Click on the link below to do PE with Joe!

[PE With Joe | 2021](#)

Wednesday - Maths

Watch this short video to help you with part B!

https://www.loom.com/share/e8cca82500bf4129928eef4203247ab4?sharedAppSource=personal_library

B Write each fraction as a percentage.

- (a) $\frac{19}{100}$ (b) $\frac{63}{100}$ (c) $\frac{93}{100}$ (d) $\frac{7}{100}$ (e) $\frac{1}{25}$
- (a) $\frac{9}{25}$ (b) $\frac{13}{25}$ (c) $\frac{21}{25}$ (d) $\frac{1}{50}$ (e) $\frac{7}{50}$
- (a) $\frac{11}{50}$ (b) $\frac{23}{50}$ (c) $\frac{49}{50}$ (d) $\frac{1}{20}$ (e) $\frac{3}{20}$
- (a) $\frac{11}{20}$ (b) $\frac{17}{20}$ (c) $\frac{19}{20}$ (d) $\frac{3}{10}$ (e) $\frac{7}{10}$

Example

$$\frac{8}{25} = \frac{?}{100} = \frac{32}{100} = 32\%$$

Use when denominator is a factor of 100

Watch this short video to help you with part C!

<https://www.loom.com/share/1dc742b3816443a79bafef5f247354e>

a

C Write each fraction as a percentage.

- (a) $\frac{1}{6}$ (b) $\frac{1}{3}$ (c) $\frac{2}{3}$ (d) $\frac{1}{7}$
- (a) $\frac{3}{7}$ (b) $\frac{4}{7}$ (c) $\frac{6}{7}$ (d) $\frac{1}{8}$
- (a) $\frac{3}{8}$ (b) $\frac{5}{8}$ (c) $\frac{7}{8}$ (d) $\frac{1}{9}$
- (a) $\frac{2}{9}$ (b) $\frac{5}{9}$ (c) $\frac{8}{9}$ (d) $\frac{1}{11}$

Example

Write $\frac{5}{6}$ as a percentage
When denominator is not a factor of 100:

- Multiply by 100 $\frac{5}{6} \times \frac{100}{1} = \frac{500}{6}$
- Then divide.
 $500 \div 6 = 83\frac{2}{6}\% = 83\frac{1}{3}\%$

[Click here to return to the timetable](#)

Wednesday-English

Prefixes-A prefix is a word or letters which are placed before the stem of a word. Adding it to the beginning of one word changes it into another word. For example, when the prefix un- is added to the word happy, it creates the word unhappy.

NAME: _____ DATE: _____

GRAMMAR WORKSHEET

PREFIX: Un-



| | | | |
|-------------|-------------|----------|------------|
| complicated | healthy | clear | believable |
| answered | acceptable | kind | finished |
| employed | used | afraid | furnished |
| able | comfortable | expected | happy |

- Complete the sentences below. Use the prefix 'un-' with the words in the box.

-
- Complete the sentences below. Use the prefix 'un-' with the words in the box.

1. Smoking isn't good for your body. It's very unhealthy.
2. The company's annual report is _____. I have to finish it by tomorrow.
3. I was _____ to go to the meeting yesterday because I was sick. I couldn't go.
4. Of course, my teammates were _____ after we lost the game.
5. We like our math teacher. He makes difficult problems seem easy and _____.
6. The new apartment we moved into doesn't have any furniture. It's _____.
7. My brother doesn't have a job. He's still _____.
8. It snowed yesterday ... and it's August! It's _____!

[Click here to return to the timetable](#)

9. I don't understand how to use this new machine. The instructions are _____
10. Ouch! My new shoes are a little too small. They feel _____.
11. Sue forgot to answer all the test questions. There were two questions _____
12. The car I bought is new. It's completely _____.
13. I don't like Sam. He's not very nice. Sometimes, he can be _____
14. Mikey is only three years old but he is _____ of the dark.
15. You're always late for work! It's _____! You must come on time!
16. I was quite surprised when our boss gave us a holiday. It was _____

Reading:

Epic Reading Website

Try to read at least one page of a book everyday.

<https://www.getepic.com/students>

1. Click on Student Log In
2. Click on the Select your Class Icon with the password
upq4682
3. Type your name into the search bar
4. Click on the character with your name.
5. Explore the library of books.
6. Select one that you like and Happy Reading.

See video below for further help with logging in.

https://photos.google.com/direct/AF1QipOvH5-YgxSmHXrA7Ppl6G_duDcinJuAmIGf_D4cr0YuuQmM_aFV1uRI6eeMuP4hzA

[Click here to return to the timetable](#)

Wednesday - Gaeilge

Ceannaigh = 'to buy'

"Ceannaím seacláid sa siopa gach lá" = *I buy chocolate in the shop every day*

"An gceannaíonn tú cóipleabhar sa siopa na scoile?" = *Are you buying a copy in the school shop?*

| Ceannaigh | |
|-----------------|--|
| Gach Lá ^ | |
| Ceannaím | |
| Ceannaíonn tú | |
| Ceannaíonn sé | |
| Ceannaíonn sí | |
| lolra ^ | |
| Ceannaímid | |
| Ceannaíonn sibh | |
| Ceannaíonn siad | |
| Ceisteanna ^ | |
| An gceannaíonn? | |
| Ní cheannaíonn | |

Déan usáid as an chart chun na bhearnaí a líonadh. Scrlobh amach na habairtí i bhur chóipleabhair.

Use this chart to fill in the blanks. Write out the sentences in your copy.

1. _____ úll agus seacláid sa siopa gach lá. (mé)

[Click here to return to the timetable](#)

2. _____ leabhair sa siopa leabhair inniú. (sé)
3. _____ liathróid sa siopa spóirt inniú. (sí)
4. An _____ tú arán inniú?
5. Ní _____ mé arán inniú?

Wednesday- SESE

Predict:

1. Write down why you think that Antarctica might be the least populated continent in the world?
2. What might you expect to see in Antarctica if you were to go there?

Watch:

3. Watch this video about animals in Antarctica, the least populated continent in the world.

[Antarctica.mp4](#)

Write:

4. Choose your favourite animal from the video. Draw a picture of it and write down *at least 5 facts* about it. Don't forget to use full sentences for your facts and email your work to your teacher!

[Click here to return to the timetable](#)

Wednesday - SPHE

Making decisions Lesson 4

1. Record (write down) your ideas and thoughts on each on the three situations in your copy/ journal
2. Have a family discussion on the situations presented
3. Everyone gets their say, we listen and value everyone's opinions.

Situation 1:

Lucy is really worried about a Math`s test she has in school this Friday. She has been struggling with her Maths homework. Her mam has been really busy at work recently and Lucy doesn't want to annoy her.

What should she do?

What advice would you give her?

Situation 2:

Tom went to the shop with his friend and he saw his friend take a bar of chocolate from the shelf. His friend did not go to the counter and pay for the bar. Instead he just walked out of the shop and did not pay.

What should Tom do?

What advice would you give him?

[Click here to return to the timetable](#)

Situation 3:

Sarah`s friend, Julie, took some cigarettes from her older brother's bedroom. She wants to try smoking them and she wants Sarah to try them with her. Sarah does not want to do that.

What should Sarah do?

What advice would you give her?

Art:

Design a poster/ piece of art based on you and your family's thoughts. Take a picture and send in to your class teachers. It can also be part of your journal.

Thursday- P.E

Dance lesson 2

Please see the following link for some fun activities the whole family can do. Please record any comments/ funny things that happened in your journal.

<https://vimeo.com/425848548>

[Click here to return to the timetable](#)

Thursday Maths

Change the percentage to a fraction (each fraction is given to you in the blue box to help). Then you divide by the bottom number of the fraction and multiply by the top.

For example: 1(e) $16\frac{2}{3}\%$ of 72.

1. I look at the blue box and it tells me $16\frac{2}{3}\%$ as a fraction is $\frac{1}{6}$
2. Now I am getting $\frac{1}{6}$ of 72.
3. Here I will divide by the bottom and multiply by the top.
4. 6 into 72 is 12. 12 multiplied by 1 = 12, therefore my answer is **12**. Here is it written as a sum: **$72 \div 6 = 12$, $12 \times 1 = 12$**

Find the answers in your head if you can.

1. (a) 50% of 48 (b) $33\frac{1}{3}\%$ of 27
(c) 25% of 36 (d) 20% of 45
(e) $16\frac{2}{3}\%$ of 72 (f) $14\frac{2}{7}\%$ of 63
(g) $11\frac{1}{9}\%$ of 54 (h) $12\frac{1}{2}\%$ of 56
2. (a) $66\frac{2}{3}\%$ of 21 (b) 75% of 44
(c) 80% of 35 (d) 40% of 55
(e) $37\frac{1}{2}\%$ of 72 (f) $87\frac{1}{2}\%$ of 32
3. (a) 25% of 924 (b) $33\frac{1}{3}\%$ of 855
(c) $16\frac{2}{3}\%$ of 738 (d) $14\frac{2}{7}\%$ of 868
(g) $12\frac{1}{2}\%$ of 912 (h) $11\frac{1}{9}\%$ of 2,178

Common percentages

$$\begin{aligned} \frac{1}{2} &= 50\% \\ \frac{1}{3} &= 33\frac{1}{3}\% & \frac{2}{3} &= 66\frac{2}{3}\% \\ \frac{1}{4} &= 25\% & \frac{3}{4} &= 75\% \\ \frac{1}{5} &= 20\% & \frac{2}{5} &= 40\% & \frac{3}{5} &= 60\% & \frac{4}{5} &= 80\% \\ \frac{1}{6} &= 16\frac{2}{3}\% & \frac{1}{7} &= 14\frac{2}{7}\% \\ \frac{1}{8} &= 12\frac{1}{2}\% & \frac{3}{8} &= 37\frac{1}{2}\% & \frac{5}{8} &= 62\frac{1}{2}\% & \frac{7}{8} &= 87\frac{1}{2}\% \\ \frac{1}{9} &= 11\frac{1}{9}\% & & & \frac{1}{20} &= 5\% \\ \frac{1}{10} &= 10\% & \frac{3}{10} &= 30\% & \frac{7}{10} &= 70\% & \frac{9}{10} &= 90\% \end{aligned}$$

- (e) 10% of 173 (f) 20% of 845
(i) $12\frac{1}{2}\%$ of 1,000 (j) 25% of 3,129

[Click here to return to the timetable](#)

Thursday-English

Create an Advertisement

Pretend you are selling a new toy on the market.

1. Think about the type of toy and what it could be called:



2. How much does it sell for? Where can you buy it?

3. Who would want this toy? What ages or gender?

4. Give two reasons why kids should own this toy.

Create your advertisement in the box below. Be sure to draw a picture of your toy and include the information above. Look at the examples below for help.

[Click here to return to the timetable](#)



[Click here to return to the timetable](#)

NEW! **PIZZA NIGHT!**
FAMILY DINNER GAME
 A whole new way to enjoy
 pizza at home!

Toy Fair Special!
2 Games FREE
 + Free Freight
 ask for details
Booth #1733E

150 pizza night activities
 for the whole family.
 Call your Sales Rep or
1-877-261-2714 www.FamilyDinnerGames.com

Family Time Fun

Reading:

Epic Reading Website

Try to read at least one page of a book everyday.

<https://www.getepic.com/students>

1. Click on Student Log In
2. Click on the Select your Class Icon with the password upq4682
3. Type your name into the search bar
4. Click on the character with your name.
5. Explore the library of books.
6. Select one that you like and Happy Reading.

See video below for further help with logging in.

https://photos.google.com/direct/AF1QipOvH5-YgxSmHXrA7Ppl6G_duDcinJuAmlGf_D4cr0YuuQmM_aFV1uRI6eeMuP4hzA

[Click here to return to the timetable](#)

Thursday - Gaeilge


Éist go curamach agus scríobh síos na focail atá as láthair i bhur gcóipleabhair.


Listen carefully and write down the missing words in your copy.


You may need to play the video several times.


[Tasc eisteachta Rang6 Wk3.mp4](#)


E. Éist agus líon na bearnaí.


 **Magda:** Féach ar an _____ seo.
Tá sí _____.

 **Síofra:** Cinnte. Féach ar an _____ dubh.
Nach bhfuil sé _____?

 **Magda:** Tá sé go deas. Ach b'fhearr liom an _____.
Tá sé _____ freisin.

 **Síofra:** Tá an ceart agat. Féach ar na _____ taobh thiar díot.
An bhfuil siad rógheal, meas tú?

 **Magda:** Hmm. B'fhearr liom _____.
Tá siad _____ freisin.

 **Síofra:** Ó, féach ar na _____ sin.
Ceapaim go n-oireann siad duit.

Thursday- Art

How to Draw a Penguin.

Penguins are found in Antarctica. Follow this step by step instructions to draw a penguin and colour in whatever way you like!

[How To Draw A Cartoon Penguin](#)

[Click here to return to the timetable](#)

****Don't forget to send a picture of your drawing to your teacher!****

Friday - Maths

Percentages Word Problems

Aim: I can solve problems using percentages 😊

Watch this short video to help with sums below.

<https://www.loom.com/share/ca469b3812f64adc8fb72d802e7f045d>

Twinkl Superstore is having a mega sale! Each item has been reduced. Calculate how much each item will now cost.



2. Karl ran twice in one week. On Monday, he ran for 50 minutes. The next day, he ran for 10% longer. How many minutes did he run altogether on the two days?

3. A bike costs £160 after being reduced by 20%. How much did the bike cost before it was reduced?

A.J. designs new gadgets in a gadget factory. His moustache trimmer comes in two versions: standard and deluxe. **2,136** models were sold last year, of which

4. **25%** were deluxe. **How many standard models were sold?**

Here is a fun maths games to play:

<https://nrich.maths.org/1249>

[Click here to return to the timetable](#)

[Friday-English](#)

Persuasive Writing


You have created a new brand of trainers or shoes. *Persuade* people to buy your new trainers using this billboard advertisement.

Remember: Draw the footwear you have created. Use persuasive language. Make it colourful. Use short phrases to make people want to buy it. Say what is good/special about it. Don't use long sentences. Look at the examples below for help.

Persuasive Writing - Billboard Advert

You have created a new brand of trainers or shoes. Persuade people to buy your new trainers using this billboard advert.

Remember: Draw the footwear you have created, use persuasive language, make it colourful, use short phrases to make people want to buy it, say what is good/special about it. Don't use long sentences.





Reading:

Epic Reading Website

Try to read at least one page of a book everyday.

<https://www.getepic.com/students>

1. Click on Student Log In
2. Click on the Select your Class Icon with the password upq4682
3. Type your name into the search bar
4. Click on the character with your name.
5. Explore the library of books.

[Click here to return to the timetable](#)

6. Select one that you like and Happy Reading.

See video below for further help with logging in.


https://photos.google.com/direct/AF1QipOvH5-YgxSmHXrA7Ppl6G_duDcinJuAmlGf_D4cr0YuuQmM_aFV1uRI6eeMuP4hzA

Friday - Gaeilge

Tarraing do ionad siopadóireachta féin. Cad iad na siopaí atá ann? An bhfuil aon rud eile ann, mar shampla: linn snámha, caife, rinc oighir? Tóg grianghraf agus seol é go dtí do mhúinteoir.

Design your own shopping centre. What shops do you have in it? Is there anything else, eg: swimming pool, café, ice rink? Take a photo and send it to your teacher.

[Click here to return to the timetable](#)



Friday- Drama

Imagine that you are a scientist or an explorer living in Antarctica.

Write a short Diary entry about what life is like for you.

Include:

- What day/ time it is
- What the weather has been like
- What you spend your day doing
- What animals you see
- What you miss most about being at home

[Click here to return to the timetable](#)