

# 3rd Class - Answers

25th -29th May (Week 7)

## Monday:

### English:

William Tell:

1. William Tell lived in Uri, in Switzerland.
2. He was a famous archer - with great skill with a crossbow.
3. William put an apple on his son's head.
4. William put two arrows in his quiver.
5. I think Gessler went pale because he was scared.

Recount to be sent to your own teacher - by email

Ms Mc Cague = [emccague@staidanssns.ie](mailto:emccague@staidanssns.ie)

Ms Mc Hugh = [mmchugh@staidanssns.ie](mailto:mmchugh@staidanssns.ie)

Ms Ni Almhain = [mnialmhain@staidanssns.ie](mailto:mnialmhain@staidanssns.ie)

### SESE

1. A bird feeder is a container designed to be filled with birdseed and placed outdoors to attract wild birds.
2. People put bird feeders out to feed the birds in case they can't find any food. Some people also like to attract birds to their gardens so they can see different species.
3. Plastic, wood and metal can be seen in the bird feeders in the picture.
4. These materials may have been used because they are strong, water resistant, easy to get, see through, durable etc.
5. I think a bird feeder should be hung in a tree.  
I think a bird feeder should be placed on a garden wall.  
I think a bird feeder should be hidden in a bush.  
(This is a personal preference question- almost any answer can be correct.)

Name of material	Is it suitable or unsuitable for a bird feeder?	Why/ why not?
Paper	No	It is not water resistant It is not strong It can rip easily It is opaque (not see through)
Cardboard	No	It is not water resistant It is not strong It can rip easily It is opaque (not see through)
Plastic	Yes	It is hard It is durable It is water resistant It is transparent (see through) It is reusable
Fabric	No	It is opaque It is not water resistant
Wood	Yes	It is strong It is a natural material It might remind the bird of their natural habitat It is water resistant
Glass	Yes/ No	Yes- it is hard, durable, water resistant, transparent, recyclable No- it is fragile (can break easily)

## Gaeilge

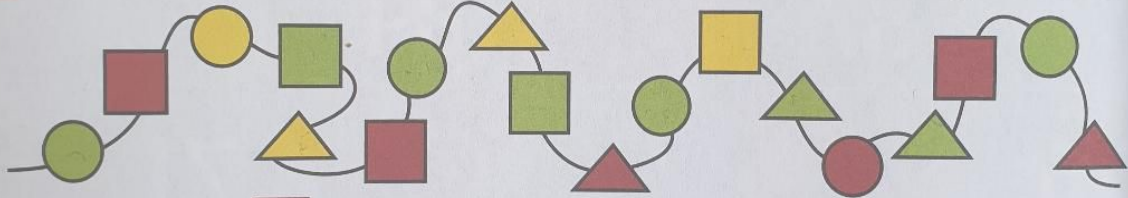
### An Aimsir

Sunny	Windy	It is raining	It is snowing	Summer
Autumn	It is wet	cloudy	Snow man	May

grianmhar	gaofar	Ta sé ag cur báistí	Ta sé ag cur sneachta	An Samhradh
An Fómhar	Tá se fliuch	scamallach	Fear Sneachta	Bealtaine

## Maths

**B** Look at the picture of the necklace below. Write the missing numbers.



1. There are  green beads on the necklace.
2. There are  yellow beads on the necklace.
3. There are  red beads on the necklace.
4. There are  beads altogether on the necklace.
5. There are  square beads on the necklace.
6. There are  round beads on the necklace.
7. There are  triangular beads on the necklace.
8.  beads are round and green.
9.  beads are square and red.
10.  beads are triangular and yellow.



## Tuesday:

### English

#### Scrambled sentences:

1. I have a blue bottle.
2. Dad is gone to the shop and the park.
3. Mary ate all the cake.
4. My favourite colour is blue.
5. The doctor gave the patient medicine.
6. My aunt won the lotto.
7. Mum likes to drink coffee.

8. The robber stole my money.
9. An artist painted the picture. (A artist - is ok too because there was a mistake on the page)
10. Kate got a new jacket at the weekend.
11. The cow ate the grass quickly.
12. The cross teacher shouted at the students.
13. The soldier marched into battle.
14. I have new shoes.
15. My computer is broken.

## SESE

Take a picture of your plan and your list of materials and email it to your teacher.

## Gaeilge

### Mé Féin

nose	name	grandmother	grandfather	sister
brother	blonde	body	Tallaght	Dublin

srón	ainm	sean mhathair	Sean athair	deirfúir
Dearthair	fionn	corp	Tamhlacht	Baile Átha Cliath

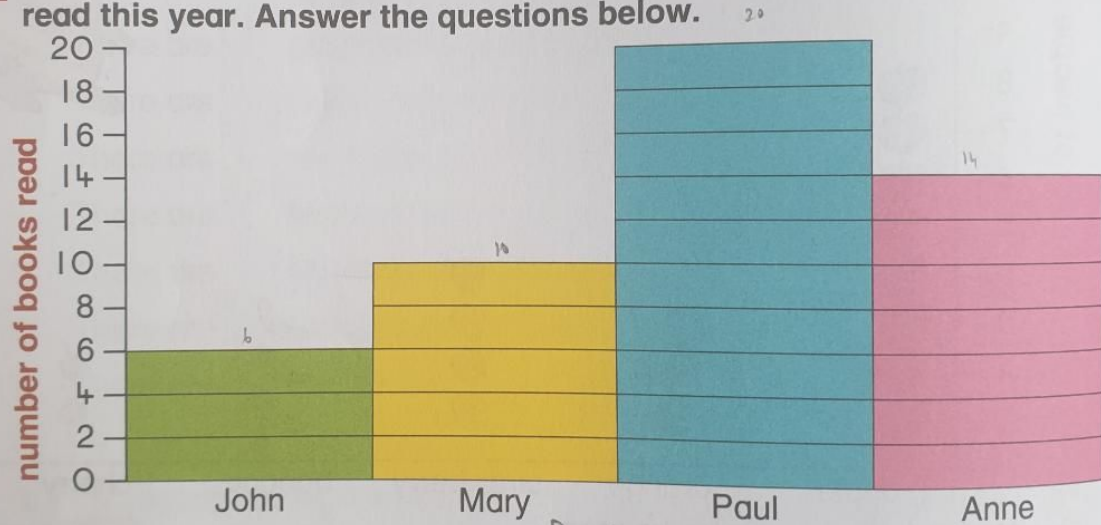
# Maths

## A Write the missing numbers.

- I have  toes altogether.
- There were **20** children in 2nd Class. There were **5** boys and  girls.
- There are **9** beads on a necklace. I added **8** more.  
There are now  beads on the necklace.
- There are **11** children on a football team.  
There are  children on 2 teams.
- A chair has **4** legs. There are  legs on **4** chairs.



## B This block graph shows the number of books that 4 children have read this year. Answer the questions below.



- Who read the most books? Paul
- Who read the least books? John
- How many children were in the survey?
- How many more books did Paul read than John?
- How many fewer books did Mary read than Anne?
- How many books altogether did John and Anne read?
- How many books did Mary and Paul read altogether?
- How many books did Paul, Anne and Mary read altogether?



# Wednesday:

## English:

### Yuri Gagarin:

1. The first person to go into space was Yuri Gagarin
2. One of his teachers had been a pilot in the Second world War, this may have inspired him.
3. Yuri was not a tall man, Yuri was a jet pilot, Yuri passed lots of tests. (Any of these are correct)
4. Yuri's spacecraft was called Vostok 1.
5. In 1968, Yuri was killed in a plane crash.

Send your recount to your teacher - email addresses in Mondays answers!

## SESE/ SPHE

Take a picture of your bird feeder and send it by email to your teacher.

## Gaeilge

### Ar Scoil

copy	book	pen	pencil	teacher
principal	yard	classroom	pupils	The office

cóipleabhar	leabhar	peann	Peann luaidh	múinteoir
príomhoide	An clós	Seomra ranga	daltaí	An oifig

## Maths

**A Match each question with the correct answer.**


- How many ears do you have? — 10
- There were 20 cakes in a box and I ate 3. How many were left? — 17
- How many toes on 2 feet? — 10
- John and Paul had 11 cars altogether. John had 7. How many cars had Paul? — 4
- How many eggs in half a dozen? — 2

**B This block graph shows the number of people who play sports.**

Sport	Number of people
football	8
tennis	2
hurling	10
basketball	5

**Answer the questions.**

- Which sport is played the most? hurling
- Which sport is played the least? tennis
- How many people play sports altogether? 25
- Hurling is twice as popular as basketball.
- How many **more** people play football than tennis? 6
- How many **fewer** people play tennis than hurling? 8
- How many people altogether play basketball and football? 13
- How many people altogether play tennis, basketball and hurling? 17



## Thursday:

### English:

These sentences can have many answers – here are some examples:

1. The guard dog barked fiercely at the thief.
2. The little bird flew high in the blue sky.
3. The thirsty cat drank milk from a saucer.

4. I saw a tall giraffe at the Zoo with a long tongue.
5. I went to the sweet shop to buy sweets for a party.
6. One day I saw a brown cow in a field.
7. The red crab walked sideways into the sea.
8. The agile boy climbed a tall tree.
9. The happy girl jumped for joy when she got a prize.
10. Sally ran away from the cross dog.
11. John hopped over the fence to escape from the bull.
12. He screamed loudly when the bull caught him.
13. She laughed at the clown when he squirted himself with water.
14. The happy teacher smiled when she saw all the work her students emailed her.
15. The sad principal frowned when he saw his empty school.

## Gaeilge

### Bia

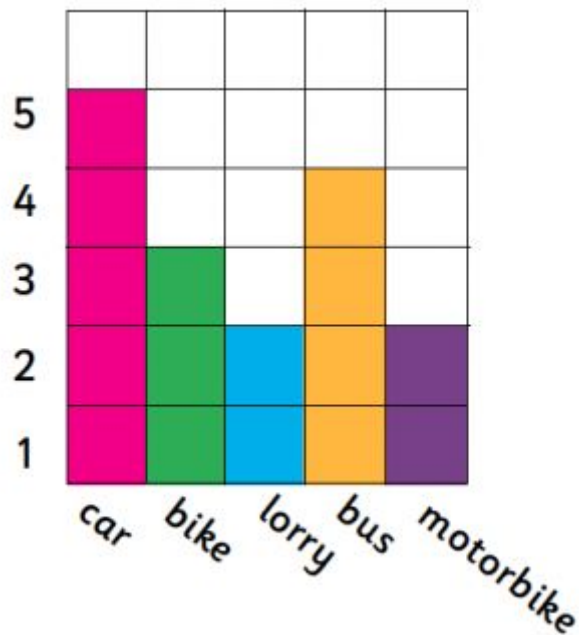
sandwiches	milk	water	fruit	vegetables
Lunch box	I'm hungry	I'm thirsty	cheese	Orange juice

ceaparaí	bainne	uisce	torthaí	glasraí
Bosca lón	Tá ocras orm	Ta tart orm	cáis	Sú oráiste



## Maths

Last Thursday, you guys did your own block graph. It should look something like this:



## Friday:

### English:

#### Dublin Zoo:

1. Dublin Zoo opened in September 1831.
2. The cages were small when the zoo first opened.
3. I do not think it was good for the animals, because they need more space.
4. Many of the monkeys live on their own special islands in the lake at Dublin Zoo.
5. The zoo is helping to protect Fruit bats and Golden Lion Tamarins.

Email your picture to your teacher

## Gaeilge:

### Sa Bhaile

Sitting room	tv	Nature programme	The News	couch
film	Do you like cartoons?	What's on tv?	soap	I like comedies

Seomra suite	teilifís	Clár dúlra	An Nuacht	tolg
scannán	An maith leat cartún	Cad atá ar an teilifís?	gallúnach	Is maith liom clár grinn

## Maths

1. Yes the information helped Sarah because it told her what were the most popular items bought during the one-hour period.
2. Scuttle and bananas
3. 5
4. 30
5. No it wouldn't. It would take too long to sell 20 more apples.
6. Yes she should because they will then get more accurate results in which are the most popular items to sell in the shop.
7. Maybe have less items for sale. Maybe bring the prices down on items that haven't been selling very good.

### Challenge

Item	Jupiter bar	Muesli bar	Banana	Snookers bar	Krunchy	apple
Selling price + 10c	60c	45c	40c	65c	45c	30c

2.  $45c \times 20 = €9$

3. Krunchy Krisps:  $45c \times 15 = €6.75$       apples:  $30c \times 8 = €2.40$

Add them together:  $€6.75 + €2.40 = €9.15$

## *Mr. Kelly*

### *Tuesday*

1. Antarctica is a very cold, icy land at the very south of our world.
2. People go to Antarctica to study the animals that live there and also study the weather.
3. Some
4. of the animals you would see there are penguins, seals and lots of whales.
5. Penguins and seals hunt fish in the sea for their food.
6. The worlds biggest penguin is called the emperor penguin.

### *Wednesday*

#### Verbs

1. Swim
2. Watches
3. No verb
4. Play
5. No verb
6. Sweeps
7. Hides
8. No verb
9. Sings
10. Has

### *Thursday*

1. Sue's favourite game is to play football.
2. Sue would like to live in the north pole because it never gets dark there and she can play football at midnight.
3. A 24 hour daytime is when it never gets dark in the summertime.
4. A polar bear might eat Sue for breakfast.
5. Sue would not be able to play football in winter because it is dark all day there.

# *Friday*

## **Narrative writing**

Read one of your favourite stories at home and email me [jkelly@staidanssns.ie](mailto:jkelly@staidanssns.ie) on who are the characters in the story, what was the conflict and where was the setting in the story.