

4th class Week 11 work

Zoom Call - We hope to see you all on the **Final** 4th Class Zoom call this Wednesday at 2pm. The code is the same as previous weeks 😊.

4th class end of year video: Keep your eyes open for a special video from your teachers this week. It will be shown at your zoom call and sent by email and text to your families.

Talent Show: Well done to all of the people who sent in videos for the talent show last week 😊 and a big shout out to the staff who sent in a talent video! Check out www.staidanssns.ie to see it.

Virtual Sports Day: This week, we will upload a daily challenge for you all complete. Keep an eye out for some teachers who will talk you through these challenges. Try your best to complete each task. Record yourself completing a challenge of your choice and email it to Ms Clingan - uclingan@staidanssns.ie - make sure you put your name and teacher's name in your email so you can earn points for your class!!

All of your teachers would really love to hear from you, so send them an email and say hi and let them know how you're getting on. **They would really like it if you could photograph and email one piece of work you are proud of, everyday or every couple of days!**

Ms Scullion uscullion@staidanssns.ie

Ms Walsh awalsh@staidanssns.ie

Ms Hayes ohayes@staidanssns.ie

Ms McHugh mmchugh@staidanssns.ie

Ms Hartland dhartland@staidanssns.ie

All work is to be completed in a copy, there is no need to print this out if you don't have a printer at home.

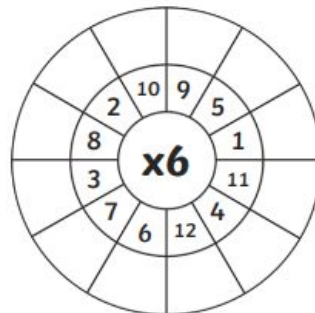
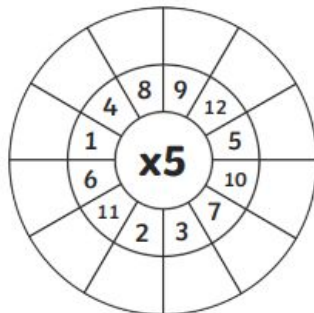
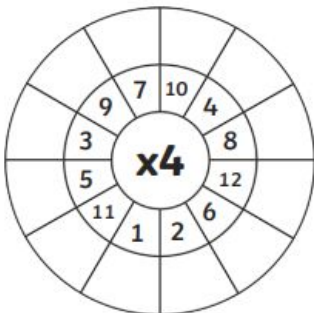
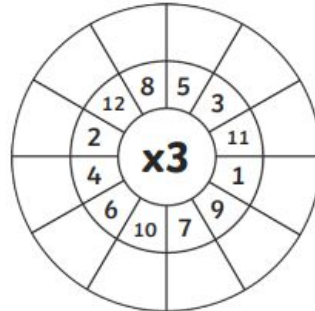
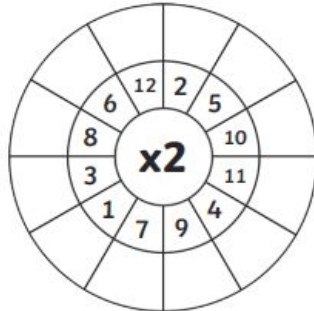
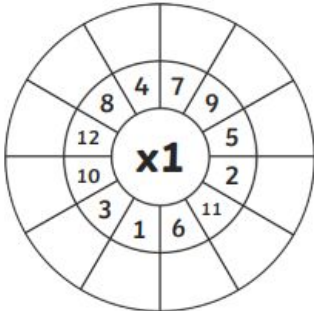
Suggested Timetable:




<u>Monday</u>	<u>Tuesday</u>	<u>Wednesday</u>	<u>Thursday</u>	<u>Friday</u>	<u>Monday</u>	<u>Tuesday</u>
Math	English	Math	English	Maths	Sports Day Video	Sports Day Video
Sports Day Video	Sports Day Video	Sports Day Video	Sports Day Video	Sports Day Video		



Monday:

Multiplication Wheels

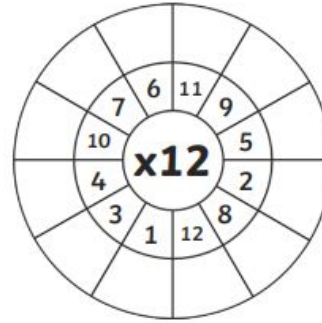
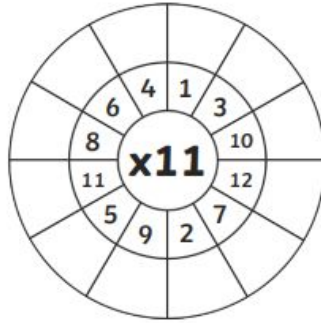
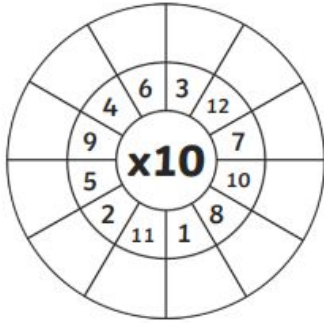
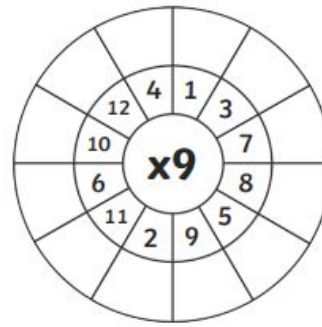
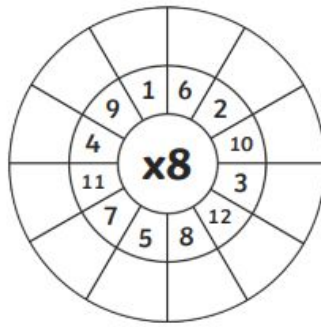
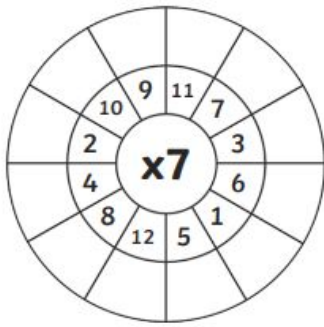
Multiply the numbers by the middle number.






1. $4 + 7 + 8 =$
2. $25 - 9 =$
3. $9 \times 5 =$
4. $14 \div 7 =$
5. $\frac{1}{2}$ of 24 =
6. What time is it? : 
7. This 3-D shape is a 
8. 0.1, 0.2, 0.3, 0.4, , ,
9. 1m = cm
10. Round 72 to the nearest 10.
11. Draw a reflection (mirror image) of this: 
12. $\text{€}9 +$ $= \text{€}10.83$

13.  There are 78 beech trees, 23 ash trees and 54 chestnut trees in a forest. How many trees are there altogether?
14. There are 124 pages in my library book. I have read 86 pages. How many pages have I left to read? 
15. In a sponsored walk, Eva walked 950m and Chris walked 750m. How far did they walk altogether?
16. The train was due to arrive at the train station at **1:10**. It arrived at **1:35**. How many minutes was it behind schedule?

Wednesday:



1. $4 \times 7 =$
2. $7 + 8 + 9 =$
3. What time is it? : 
4. This cube has faces. 
5. $24 - 9 =$
6. $32 \div 8 =$
7. $\frac{1}{4}$ of 16 =
8. Write this fraction as a decimal fraction: $\frac{1}{10}$
9. 1kg = g
10. Round 25 to the nearest 10.
11. Draw the missing half of this arrow. 
12. Count the money. How much do you have?



There are 146 children attending a school. 56 have **brown** eyes, 49 have **blue** eyes and the rest have **green** eyes.

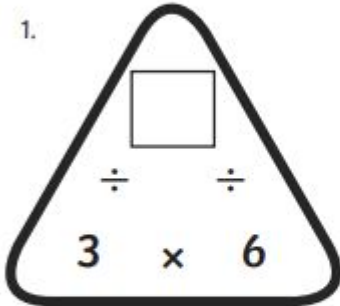
13. How many children have **green** eyes?
14. How many more children have **brown** eyes than **blue** eyes?
15. What is the most common eye colour in the school?
16. What is the least common eye colour?

Friday:

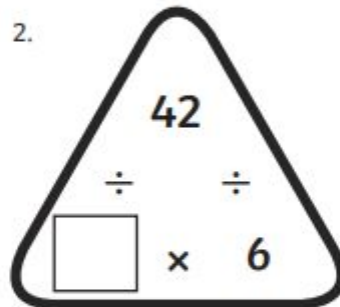
Multiplication Triangles 6, 7 and 9 Times Tables (1)

Fill in the blanks in these multiplication triangles.

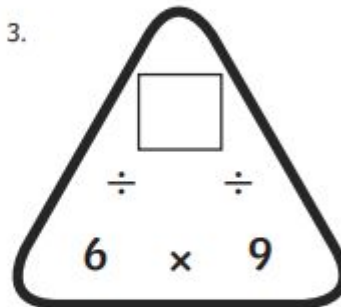
1.



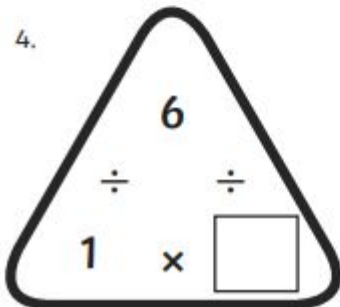
2.



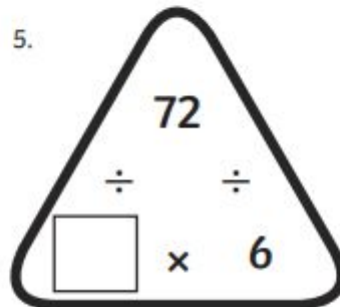
3.



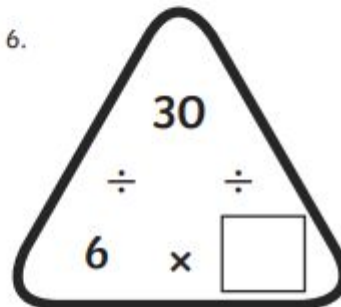
4.



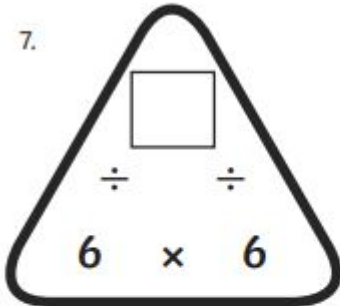
5.



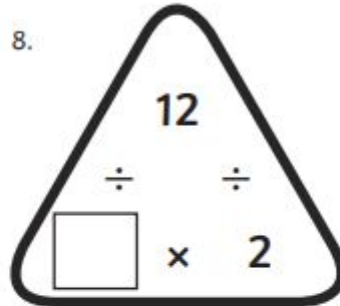
6.



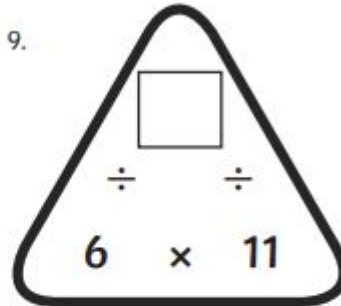
7.



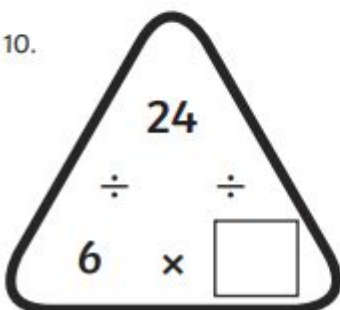
8.



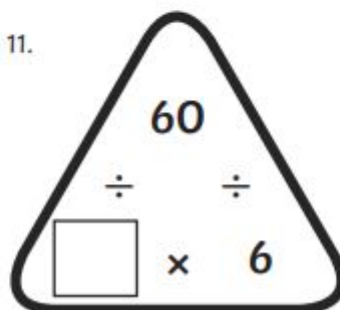
9.



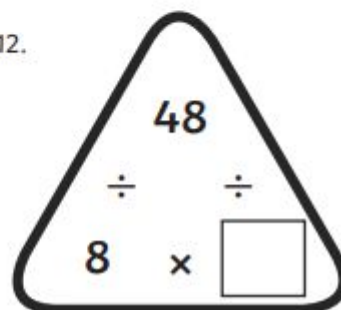
10.



11.



12.



1. $38 + 20 =$

2. $18 - 10 =$


3. $6 \times 9 =$

4. $25 \div 5 =$

5. $\frac{1}{8}$ of 32 =

6. What time is it? :



7.  A cuboid has edges.

8. What decimal is shaded?



9. $\frac{1}{2}$ m = cm

10. What number is 1 less than 100?

11. Draw a horizontal line.



12. How much?



13. My mum travels 10km to work each morning and 10km home each evening. How far does she travel to and from work in a five-day week?

14. Susan has €39.75 saved in her piggy bank. She wants to buy a new tracksuit that costs €45. How much more money does she need to save?

15. How many bags of 6 apples can be filled from a box of 72 apples?

16. Name and draw the 3-D shape that has five faces: one square base and four triangular faces.



Tuesday:

Camping

Dad, Mum, Rory and Jack were camping on Granny and Grandad's farm.

'I know this place like the back of my hand; this is the best place for camping,' said Dad, pointing to a patch of grass under a tree. Mum wasn't so sure. Just as they were putting up the tent it began to rain.

'That's only a shower,' Dad assured them. 'It'll pass in a minute.' But it didn't. The rain bucketed down and everyone got soaked. 'All part of the joys of outdoor life,' Dad said cheerfully. Mum wasn't so sure.

Soon the wind began to blow. 'That's only a light breeze,' said Dad. 'It'll soon pass.' But it didn't. The wind blew stronger and the tent began to sway from side to side.

'Look, Dad! The tent is about to blow down,' warned Rory.

'No, it won't,' Dad assured them. 'I've had this tent for years. It could withstand a hurricane.' Mum wasn't so sure.

'Now, let's get cooking,' said Dad. 'Rory, you get some firewood and we'll light a fire. Jack, fill this with water from the river,' he said, handing Jack a plastic container.

Soon Rory returned with a bundle of sticks. Dad took out the matches and tried to light the damp firewood.

'I'll have this fire blazing in no time,' he said. Mum wasn't so sure.

'Here's the water from the river,' said Jack, handing Dad a container of brownish water. 'Are you sure we can drink this stuff?'



'Of course,' said Dad. Mum wasn't so sure.

Mum took out her mobile phone. 'Hi, Granny,' she said, 'we're camping in the big field by the river but things aren't going so well.'

'I knew it wasn't a night for being outdoors,' replied Granny. 'Come on up to the house. We'll get you sorted.'

Soon they were sitting by a cosy fire, eating supper with Granny and Grandad.

'This is the best place for camping,' said Mum with a smile. Dad wasn't so sure, but he was glad to be in out of the wind and rain. ■



QUICK QUESTIONS

- 1 Where did Dad say was the best place for camping?
- 2 What were the names of the children in the family?
- 3 Do you think Mum was happy to be camping outdoors?
- 4 What jobs did Dad give each of the boys?
- 5 How did Granny and Grandad help them?

Thursday:



The sun shone in a cloudless blue sky. It was the fourth Saturday of August and everyone was still on holidays.

'Time for one last barbecue,' said Dad. 'This is our last chance to eat outside before school starts again.'

Dad loved cooking on the barbecue. He especially liked cooking sausages and steaks but he usually let Mum do what he called the 'easy bits' such as preparing salads and bread rolls and getting the drinks.

'I'll have two sausages,' shouted Rita. 'I'm going to make the biggest hot dog ever.'

'I'll have a nice juicy steak,' said Dad, adding it to the barbecue.

Mum arrived with the salads and the family sat down to eat in the garden.

'There's nothing like fresh air to make you hungry,' laughed Dad as he tucked into his dinner.

Rita and Jonathan soon had their mouths full of hot dog and blobs of ketchup on their faces. Nobody noticed that Dad had forgotten to switch off the gas barbecue. Soon smoke began to waft out from under the lid. Before long the barbecue was fully aflame.

'What's that smell?' asked Rita. 'Are some of our neighbours having a barbecue too?'

'If they are, they've burned their food,' said Mum, sniffing the air.

Jonathan turned around and shouted, 'Look, Dad! Our barbecue's on fire!'

Mum jumped up. She ran to get the fire extinguisher. She directed the foam at the barbecue and put out the fire.

'That was a close one,' Dad exclaimed.

'We're lucky we had a fire extinguisher to hand,' said Mum.

'I think I'll have an ice cream foam for dessert,' laughed Jonathan, looking at the still-smouldering barbecue covered in white froth. ■

QUICK QUESTIONS

- 1 On what day of the week did the family have their barbecue?
- 2 What meat did Dad barbecue for his dinner?
- 3 Why did Rita think the neighbours were also having a barbecue?
- 4 Who was first to see the fire?
- 5 How did Mum extinguish the fire?